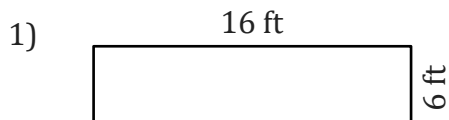


Area and Perimeter

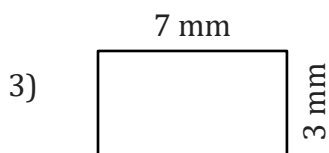
Name: _____

Date: _____

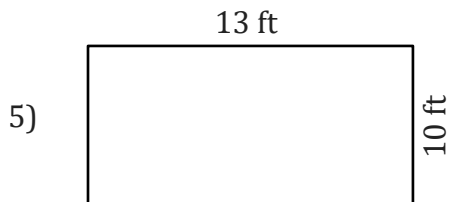
To find the area of a rectangle, multiply the length and width. $A = L \times W$.
To find the perimeter of a rectangle, add the lengths of sides together. $P = 2(L + W)$



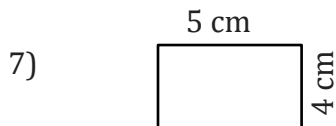
Area = _____
Perimeter = _____



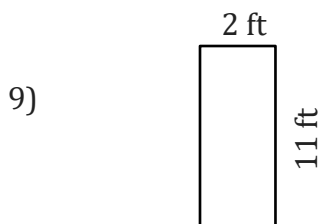
Area = _____
Perimeter = _____



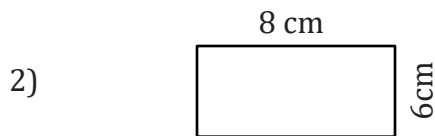
Area = _____
Perimeter = _____



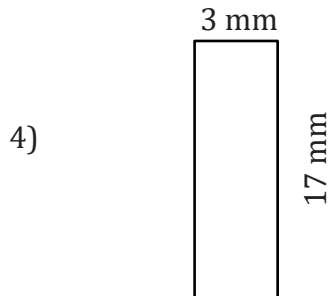
Area = _____
Perimeter = _____



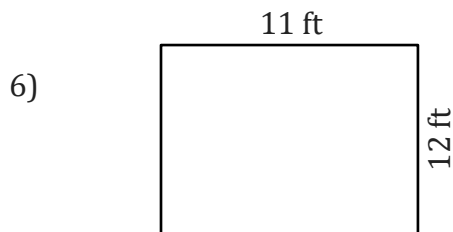
Area = _____
Perimeter = _____



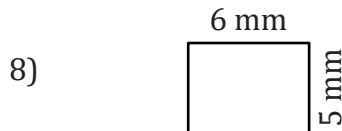
Area = _____
Perimeter = _____




Area = _____
Perimeter = _____



Area = _____
Perimeter = _____



Area = _____
Perimeter = _____



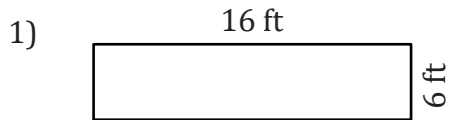
Area = _____
Perimeter = _____

Area and Perimeter

Name: _____

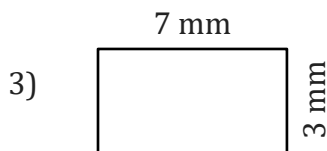
Date: _____

To find the area of a rectangle, multiply the length and width. $A = L \times W$.
To find the perimeter of a rectangle, add the lengths of sides together. $P = 2(L + W)$



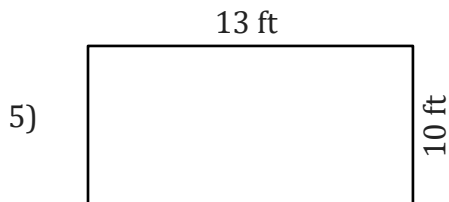
$$\text{Area} = 16 \text{ ft} \times 6 \text{ ft} = 96 \text{ ft}^2$$

$$\text{Perimeter} = 2(16 \text{ ft} + 6 \text{ ft}) = 44 \text{ ft}$$



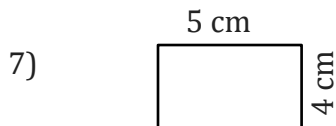
$$\text{Area} = 7 \text{ mm} \times 3 \text{ mm} = 21 \text{ mm}^2$$

$$\text{Perimeter} = 2(7 \text{ mm} + 3 \text{ mm}) = 20 \text{ mm}$$



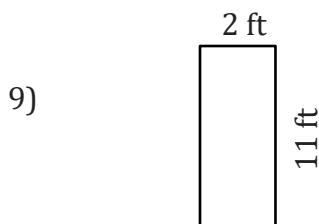
$$\text{Area} = 13 \text{ ft} \times 10 \text{ ft} = 130 \text{ ft}^2$$

$$\text{Perimeter} = 2(13 \text{ ft} + 10 \text{ ft}) = 46 \text{ ft}$$



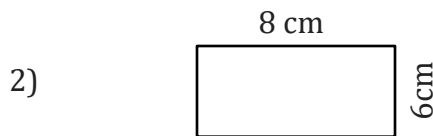
$$\text{Area} = 5 \text{ cm} \times 4 \text{ cm} = 20 \text{ cm}^2$$

$$\text{Perimeter} = 2(5 \text{ cm} + 4 \text{ cm}) = 18 \text{ cm}$$



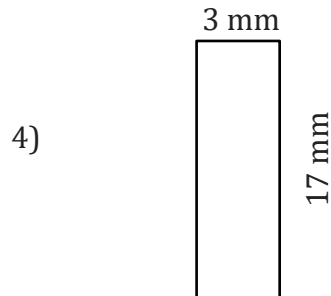
$$\text{Area} = 2 \text{ ft} \times 11 \text{ ft} = 22 \text{ ft}^2$$

$$\text{Perimeter} = 2(2 \text{ ft} + 11 \text{ ft}) = 26 \text{ ft}$$



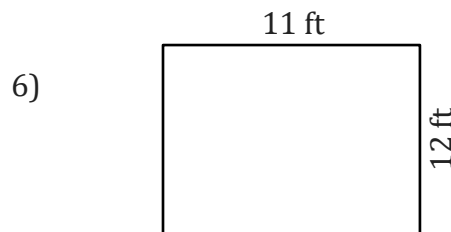
$$\text{Area} = 8 \text{ cm} \times 6 \text{ cm} = 48 \text{ cm}^2$$

$$\text{Perimeter} = 2(8 \text{ cm} + 6 \text{ cm}) = 28 \text{ cm}$$



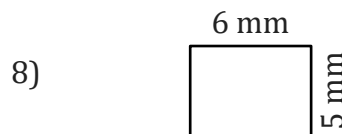
$$\text{Area} = 3 \text{ mm} \times 17 \text{ mm} = 51 \text{ mm}^2$$

$$\text{Perimeter} = 2(3 \text{ mm} + 17 \text{ mm}) = 40 \text{ mm}$$



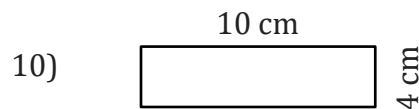
$$\text{Area} = 11 \text{ ft} \times 12 \text{ ft} = 132 \text{ ft}^2$$

$$\text{Perimeter} = 2(11 \text{ ft} + 12 \text{ ft}) = 46 \text{ ft}$$



$$\text{Area} = 6 \text{ mm} \times 5 \text{ mm} = 30 \text{ mm}^2$$

$$\text{Perimeter} = 2(6 \text{ mm} + 5 \text{ mm}) = 22 \text{ mm}$$



$$\text{Area} = 10 \text{ cm} \times 4 \text{ cm} = 40 \text{ cm}^2$$

$$\text{Perimeter} = 2(10 \text{ cm} + 4 \text{ cm}) = 28 \text{ cm}$$