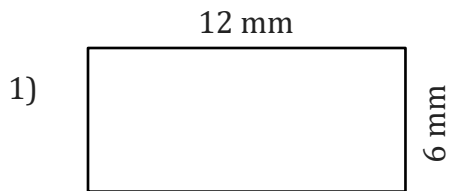


Area and Perimeter

Name: _____

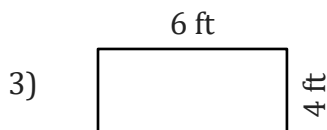
Date: _____

To find the area of a rectangle, multiply the length and width. $A = L \times W$.
To find the perimeter of a rectangle, add the lengths of sides together. $P = 2(L + W)$



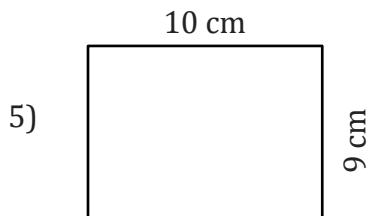
Area = _____

Perimeter = _____



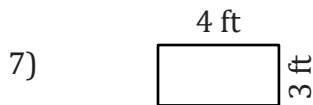
Area = _____

Perimeter = _____



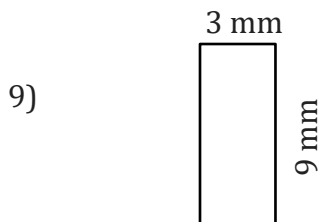
Area = _____

Perimeter = _____



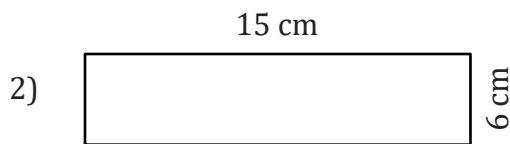
Area = _____

Perimeter = _____



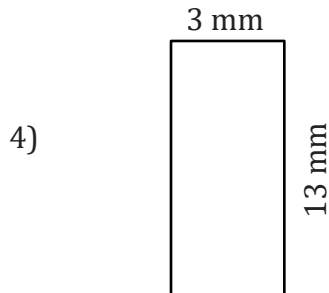
Area = _____

Perimeter = _____



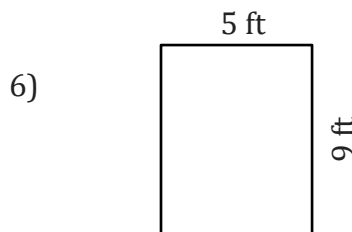
Area = _____

Perimeter = _____



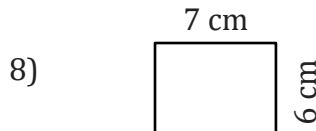
Area = _____

Perimeter = _____



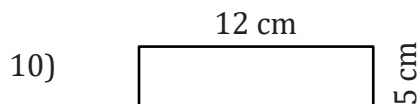
Area = _____

Perimeter = _____



Area = _____

Perimeter = _____



Area = _____

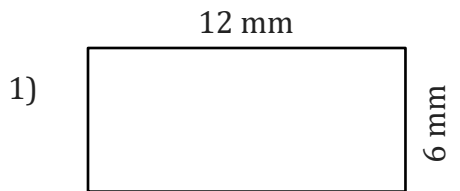
Perimeter = _____

Area and Perimeter

Name: _____

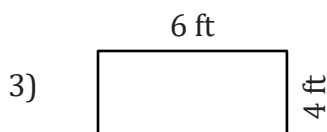
Date: _____

To find the area of a rectangle, multiply the length and width. $A = L \times W$.
To find the perimeter of a rectangle, add the lengths of sides together. $P = 2(L + W)$



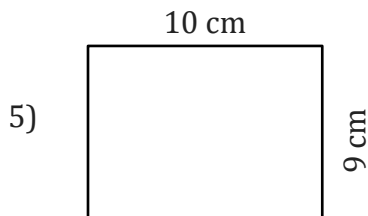
$$\text{Area} = 12 \text{ mm} \times 6 \text{ mm} = 72 \text{ mm}^2$$

$$\text{Perimeter} = 2(12 \text{ mm} + 6 \text{ mm}) = 36 \text{ mm}$$



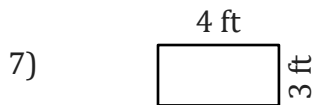
$$\text{Area} = 6 \text{ ft} \times 4 \text{ ft} = 24 \text{ ft}^2$$

$$\text{Perimeter} = 2(6 \text{ ft} + 4 \text{ ft}) = 20 \text{ ft}$$



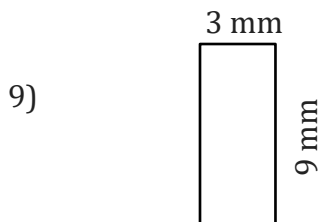
$$\text{Area} = 10 \text{ cm} \times 9 \text{ cm} = 90 \text{ cm}^2$$

$$\text{Perimeter} = 2(10 \text{ cm} + 9 \text{ cm}) = 38 \text{ cm}$$



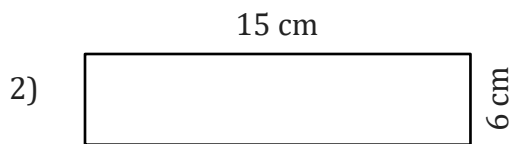
$$\text{Area} = 4 \text{ ft} \times 3 \text{ ft} = 12 \text{ ft}^2$$

$$\text{Perimeter} = 2(4 \text{ ft} + 3 \text{ ft}) = 14 \text{ ft}$$



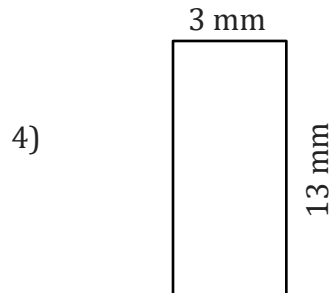
$$\text{Area} = 3 \text{ mm} \times 9 \text{ mm} = 27 \text{ mm}^2$$

$$\text{Perimeter} = 2(3 \text{ mm} + 9 \text{ mm}) = 24 \text{ mm}$$



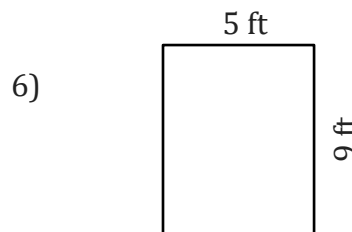
$$\text{Area} = 15 \text{ cm} \times 6 \text{ cm} = 90 \text{ cm}^2$$

$$\text{Perimeter} = 2(15 \text{ cm} + 6 \text{ cm}) = 42 \text{ cm}$$



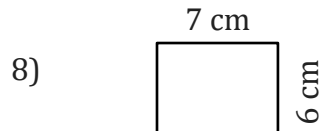
$$\text{Area} = 3 \text{ mm} \times 13 \text{ mm} = 39 \text{ mm}^2$$

$$\text{Perimeter} = 2(3 \text{ mm} + 13 \text{ mm}) = 32 \text{ mm}$$



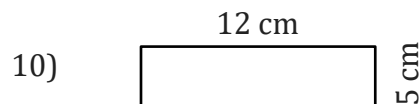
$$\text{Area} = 5 \text{ ft} \times 9 \text{ ft} = 45 \text{ ft}^2$$

$$\text{Perimeter} = 2(5 \text{ ft} + 9 \text{ ft}) = 28 \text{ ft}$$



$$\text{Area} = 7 \text{ cm} \times 6 \text{ cm} = 42 \text{ cm}^2$$

$$\text{Perimeter} = 2(7 \text{ cm} + 6 \text{ cm}) = 26 \text{ cm}$$



$$\text{Area} = 12 \text{ cm} \times 5 \text{ cm} = 60 \text{ cm}^2$$

$$\text{Perimeter} = 2(12 \text{ cm} + 5 \text{ cm}) = 34 \text{ cm}$$