

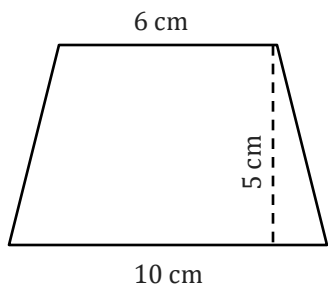
Area of a Trapezoid

Name: _____

Date: _____

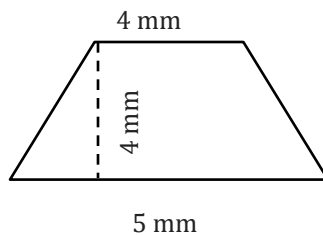
Find the area of a trapezoid.

1)



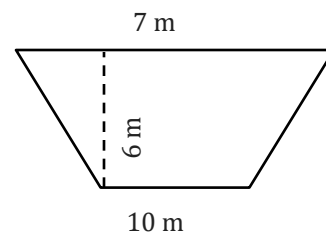
Area = _____

2)



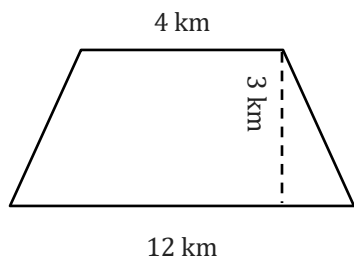
Area = _____

3)



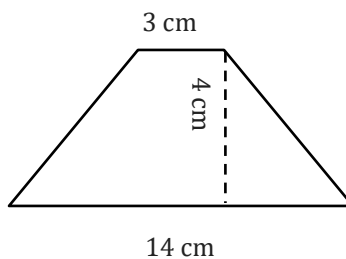
Area = _____

4)



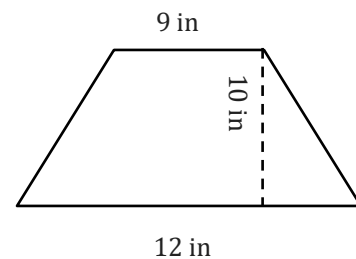
Area = _____

5)



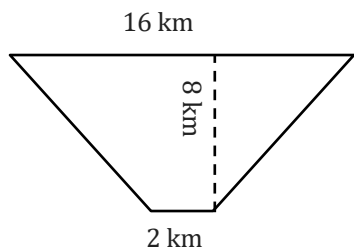
Area = _____

6)



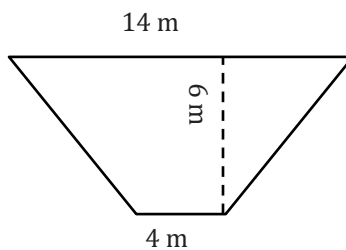
Area = _____

7)



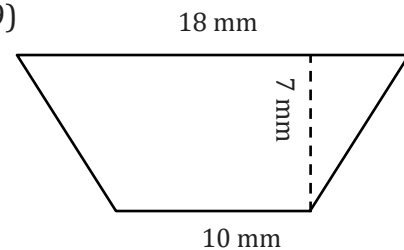
Area = _____

8)



Area = _____

9)



Area = _____

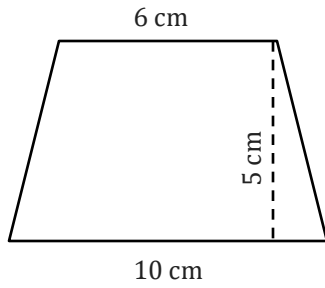
Area of a Trapezoid

Name: _____

Date: _____

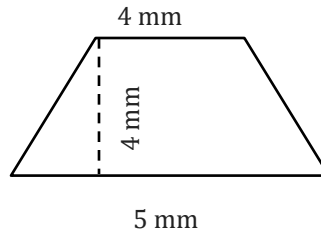
Find the area of a trapezoid.

1)



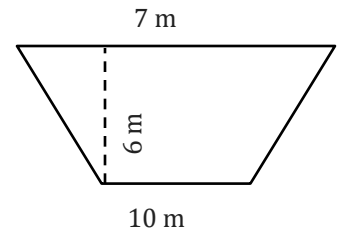
Area = 40 cm²

2)



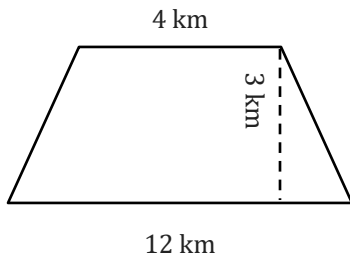
Area = 18 mm²

3)



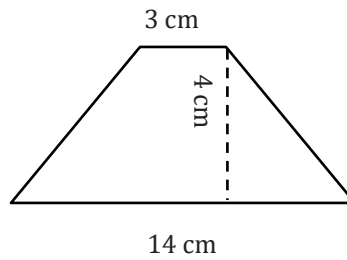
Area = 51 m²

4)



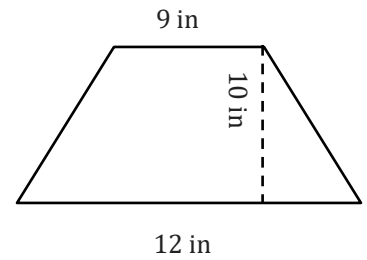
Area = 24 km²

5)



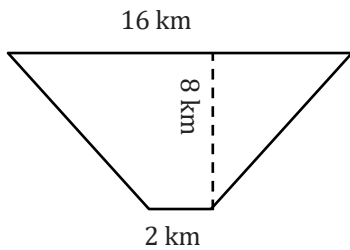
Area = 34 cm²

6)



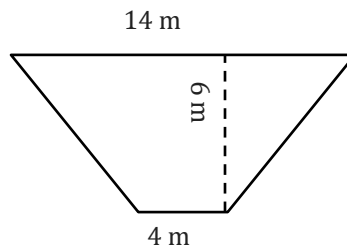
Area = 105 in²

7)



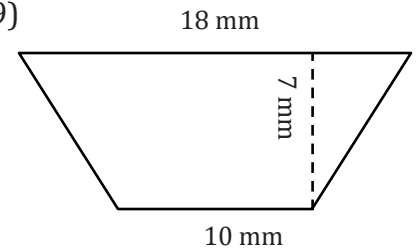
Area = 72 km²

8)



Area = 54 m²

9)



Area = 98 mm²