

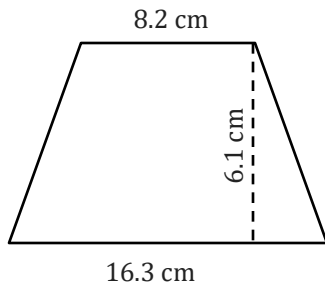
Area of a Trapezoid

Name: _____

Date: _____

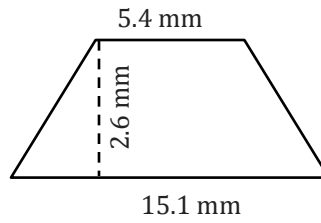
Find the area of a trapezoid.

1)



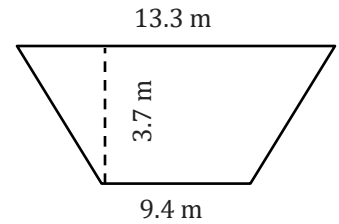
Area = _____

2)



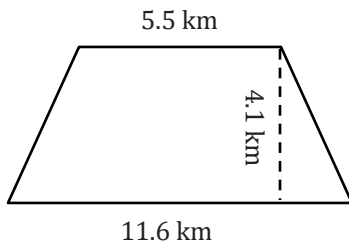
Area = _____

3)



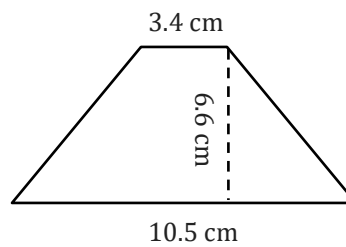
Area = _____

4)



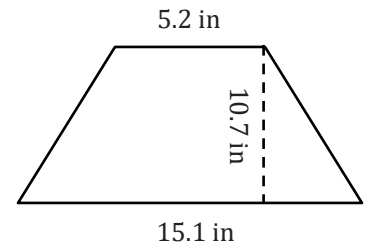
Area = _____

5)



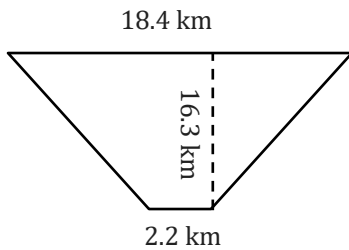
Area = _____

6)



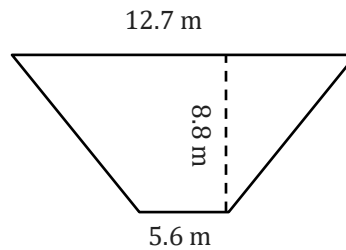
Area = _____

7)



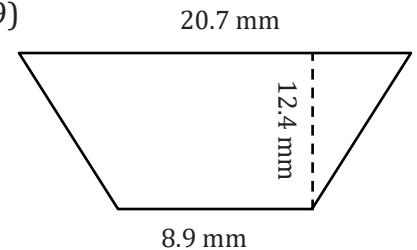
Area = _____

8)



Area = _____

9)



Area = _____

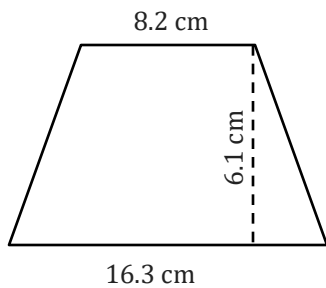
Area of a Trapezoid

Name: _____

Date: _____

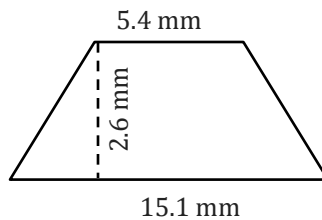
Find the area of a trapezoid.

1)



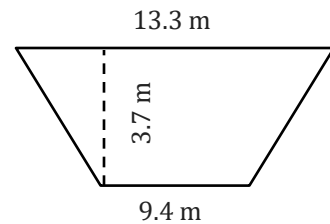
$$\text{Area} = \underline{74.72 \text{ cm}^2}$$

2)



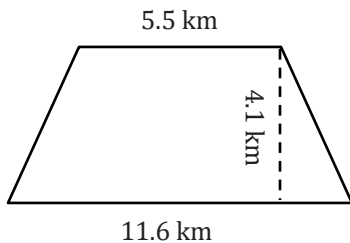
$$\text{Area} = \underline{26.65 \text{ mm}^2}$$

3)



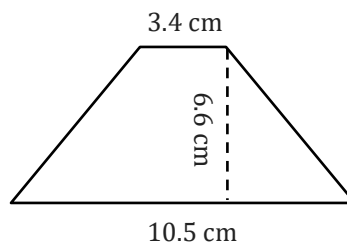
$$\text{Area} = \underline{42 \text{ m}^2}$$

4)



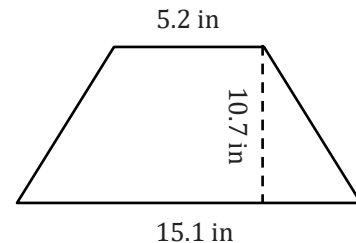
$$\text{Area} = \underline{35.05 \text{ km}^2}$$

5)



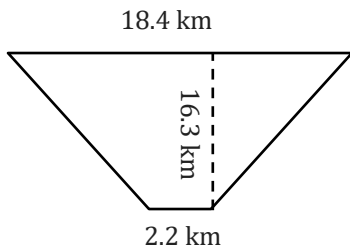
$$\text{Area} = \underline{45.87 \text{ cm}^2}$$

6)



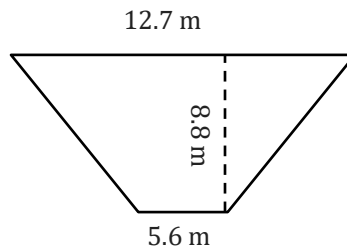
$$\text{Area} = \underline{108.6 \text{ in}^2}$$

7)



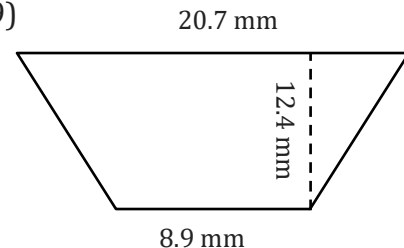
$$\text{Area} = \underline{167.89 \text{ km}^2}$$

8)



$$\text{Area} = \underline{60.2 \text{ m}^2}$$

9)



$$\text{Area} = \underline{183.52 \text{ mm}^2}$$