


Name: _____

Date: _____


Write the symbol that makes the problem true (> or <).

$$\frac{1}{\bullet}$$




$$\frac{2}{\bullet\bullet}$$

$$\frac{3}{\bullet\bullet\bullet}$$




$$\frac{4}{\bullet\bullet\bullet\bullet}$$

$$\frac{5}{\bullet\bullet\bullet\bullet\bullet}$$




$$\frac{3}{\bullet\bullet\bullet}$$

$$\frac{2}{\bullet\bullet}$$



$$\frac{4}{\bullet\bullet\bullet\bullet}$$

$$\frac{4}{\bullet\bullet\bullet\bullet}$$



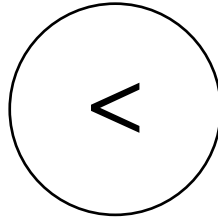
$$\frac{5}{\bullet\bullet\bullet\bullet\bullet}$$

Name: _____

Date: _____

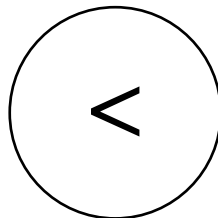
Write the symbol that makes the problem true (> or <).

$$\frac{1}{\bullet}$$



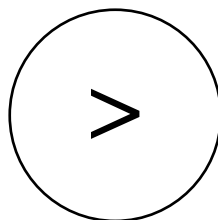
$$\frac{2}{\bullet\bullet}$$

$$\frac{3}{\bullet\bullet\bullet}$$



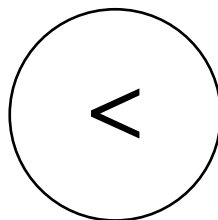
$$\frac{4}{\bullet\bullet\bullet\bullet}$$

$$\frac{5}{\bullet\bullet\bullet\bullet\bullet}$$



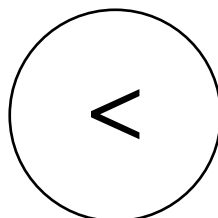
$$\frac{3}{\bullet\bullet\bullet}$$

$$\frac{2}{\bullet\bullet}$$



$$\frac{4}{\bullet\bullet\bullet\bullet}$$

$$\frac{4}{\bullet\bullet\bullet\bullet}$$



$$\frac{5}{\bullet\bullet\bullet\bullet\bullet}$$