







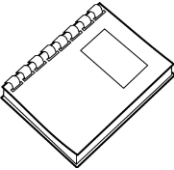



Name: _____

Date: _____

Money

Use the coins to buy the items.

Items					
 5\$					
 8.71\$					
 9.01\$					
 1\$					
 5.95\$					

2 dollars = _____ quarters	5 pennies = _____ nickel
6 nickels = _____ dimes	5 dimes = _____ nickels

Name: _____

Date: _____

Money

Use the coins to buy the items.

Items						
 5\$	10	0	0	0	0	0
 8.71\$	16	2	2	0	0	1
 9.01\$	18	0	0	0	0	1
 1\$	2	0	0	0	0	0
 5.95\$	10	3	2	0	0	0

2 dollars = 8 quarters

5 pennies = 1 nickel

6 nickels = 3 dimes

5 dimes = 10 nickels