







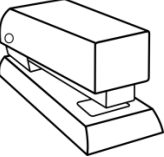



Name: _____

Date: _____

Money

Use the coins to buy the items.

Items					
 <p style="text-align: right;">4.33\$</p>					
 <p style="text-align: right;">1.37\$</p>					
 <p style="text-align: right;">7.99\$</p>					
 <p style="text-align: right;">4.80\$</p>					
 <p style="text-align: right;">1.75\$</p>					









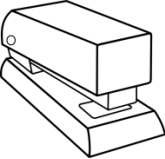

<p>2 quarters = _____ nickels</p>	<p>1 dime = _____ pennies</p>
<p>Half-dollar = _____ dimes</p>	<p>10 nickels = _____ Half -dollars</p>

Name: _____

Date: _____

Money

Use the coins to buy the items.

Items					
 4.33\$	8	0	3	0	3
 1.37\$	2	0	3	1	2
 7.99\$	14	3	2	0	4
 4.80\$	8	3	0	1	0
 1.75\$	2	3	0	0	0

2 quarters = 10 nickels

1 dime = 10 pennies

Half-dollar = 5 dimes

10 nickels = 1 Half -dollars