











Name: \_\_\_\_\_

Date: \_\_\_\_\_

**Money**

**Use the coins to buy the items.**

Items					
 <p style="text-align: right;"><b>5.41\$</b></p>					
 <p style="text-align: right;"><b>2.60\$</b></p>					
 <p style="text-align: right;"><b>2.36\$</b></p>					
 <p style="text-align: right;"><b>1.27\$</b></p>					
 <p style="text-align: right;"><b>4.50\$</b></p>					

**2 dollars = \_\_\_\_\_ dimes**

**8 quarters = \_\_\_\_\_ dollars**

**10 pennies = \_\_\_\_\_ nickels**











**3 quarters = \_\_\_\_\_ nickels**

Name: \_\_\_\_\_

Date: \_\_\_\_\_

## Money

**Use the coins to buy the items.**

Items					
 <b>5.41\$</b>	<b>10</b>	<b>1</b>	<b>1</b>	<b>1</b>	<b>1</b>
 <b>2.60\$</b>	<b>4</b>	<b>2</b>	<b>1</b>	<b>0</b>	<b>0</b>
 <b>2.36\$</b>	<b>4</b>	<b>1</b>	<b>1</b>	<b>0</b>	<b>1</b>
 <b>1.27\$</b>	<b>2</b>	<b>0</b>	<b>2</b>	<b>1</b>	<b>2</b>
 <b>4.50\$</b>	<b>8</b>	<b>2</b>	<b>0</b>	<b>0</b>	<b>0</b>

**2 dollars = 20 dimes**

**8 quarters = 2 dollars**

**10 pennies = 2 nickels**

**3 quarters = 15 nickels**