




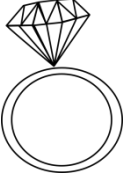
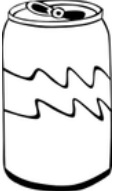





Name: _____

Date: _____

Money

Use the coins to buy the items.

Items					
 <p style="text-align: right;">90 ¢</p>					
 <p style="text-align: right;">3.52 \$</p>					
 <p style="text-align: right;">3.70\$</p>					
 <p style="text-align: right;">4.87\$</p>					
 <p style="text-align: right;">2.78\$</p>					

10 nickels = _____ quarters

2 half-dollars = _____ nickels

10 pennies = _____ dime

1 dollar = _____ quarters

Name: _____

Date: _____

Money

Use the coins to buy the items.

Items					
 90 ¢	0	2	4	0	0
 3.52 \$	6	2	0	0	2
 3.70 \$	6	2	2	0	0
 4.87 \$	8	3	1	0	2
 2.78 \$	4	3	0	0	3

10 nickels = 2 quarters

2 half-dollars = 20 nickels

10 pennies = 1 dime

1 dollar = 4 quarters