
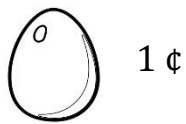


# Money

Name: \_\_\_\_\_

Date: \_\_\_\_\_

Calculate the total amount and write the change.

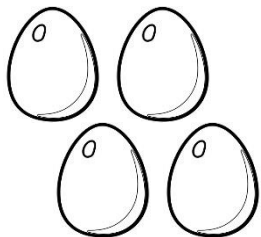


**Purchase items**

**Pay**

**How much change?**

1)



10 ¢


6 ¢

2)



10 \$

3)




25 ¢

4)



3 \$

5)




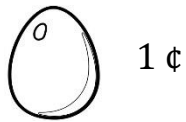
20 \$

# Money

Name: \_\_\_\_\_

Date: \_\_\_\_\_

Calculate the total amount and write the change.

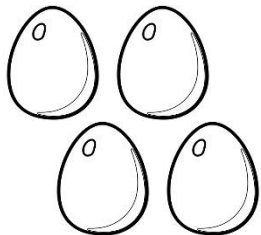


**Purchase items**

**Pay**

**How much change?**

1)



10 ¢

6 ¢


2)



10 \$

1 \$

3)



25 ¢

3 ¢


4)



3 \$

89 ¢

5)



20 \$

9.89 \$