

Money

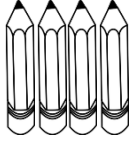
Name: _____

Date: _____

Calculate the total amount and write the change.



1\$



1.50 \$



3 \$



4.50 \$

Purchase items

Pay

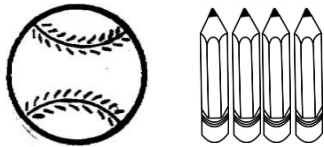
How much change?

1)



10 \$

2)




20 \$

3)



25 \$

4)



15 \$

5)



10 \$

Money

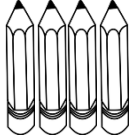
Name: _____

Date: _____

Calculate the total amount and write the change.



1\$



1.50 \$



3 \$



4.50 \$

Purchase items

Pay

How much change?

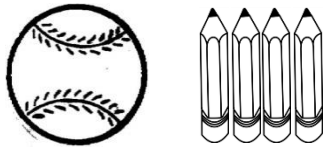
1)



10 \$

4.50 \$

2)



20 \$

15.50 \$


3)



25 \$

16.50 \$

4)



15 \$

6 \$

5)



10 \$

4.50 \$