


Money

Name: _____

Date: _____

Count the money and write the amount.


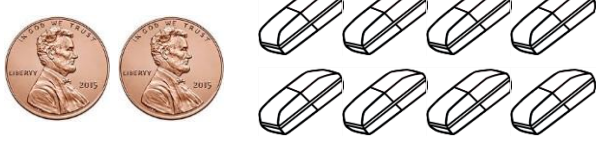
1)



94 ¢




Counting: 3 quarters = 75¢, 1 dime = 10¢, 1 nickel = 5¢, 4 pennies = 4¢. Total = 94¢.

2)



Counting: 2 pennies = 2¢, 8 dimes = 80¢. Total = 82¢.

3)



Counting: 3 quarters = 75¢, 1 dime = 10¢. Total = 85¢.

4)



Counting: 2 quarters = 50¢. Total = 50¢.

5)






Counting: 1 dime = 10¢. Total = 10¢.

6)




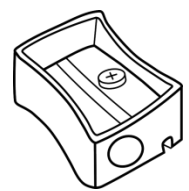

Counting: 3 quarters = 75¢, 1 dime = 10¢, 2 dimes = 20¢. Total = 105¢.

7)



Counting: 1 penny = 1¢. Total = 1¢.

8)






Counting: 1 penny = 1¢. Total = 1¢.

9)



Counting: 2 quarters = 50¢, 2 dimes = 20¢. Total = 70¢.

10)



Counting: 3 quarters = 75¢, 1 dime = 10¢, 4 pennies = 4¢. Total = 89¢.

Money

Name: _____

Date: _____

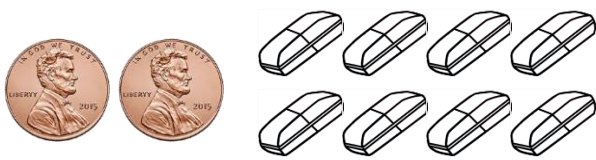
Count the money and write the amount.

1)




Three quarters (25¢ each) and four pennies (1¢ each) are shown. To the right is an illustration of three pencils. Below the coins is a box containing the text "94 ¢".

2)



Two pennies (1¢ each) and eight paper clips are shown. Below the items is a box containing the text "2 ¢".

3)




Four quarters (25¢ each) and one nickel (5¢) are shown. To the right is an illustration of a hair dryer. Below the coins is a box containing the text "80 ¢".

4)



Two quarters (25¢ each) are shown. To the right is an illustration of a notebook. Below the coins is a box containing the text "50 ¢".

5)




One nickel (5¢) is shown. To the right is an illustration of a pen. Below the coin is a box containing the text "5 ¢".

6)




Five quarters (25¢ each) and two nickels (5¢ each) are shown. To the right is an illustration of a diamond ring. Below the coins is a box containing the text "90 ¢".

7)




One penny (1¢) is shown. To the right is an illustration of an apple. Below the coin is a box containing the text "1 ¢".

8)




One penny (1¢) is shown. To the right is an illustration of a coin box. Below the coin is a box containing the text "1 ¢".

9)



Four quarters (25¢ each) and five candies are shown. Below the coins is a box containing the text "70 ¢".

10)



Three quarters (25¢ each), one nickel (5¢), and four pennies (1¢ each) are shown. To the right is an illustration of five balloons. Below the coins is a box containing the text "89 ¢".