

Name: \_\_\_\_\_

Date: \_\_\_\_\_

# Money

Count the amount in each piggybank and write the answer.

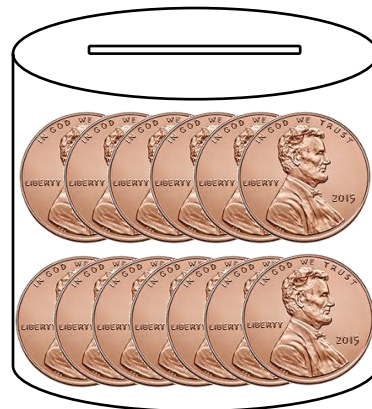
1)



2)




3)



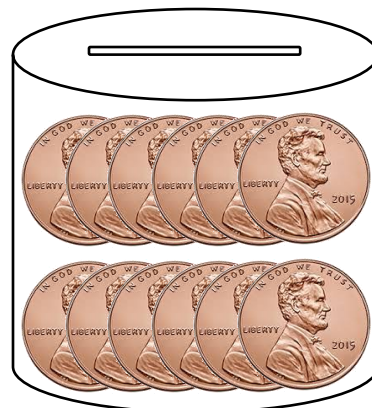
4)



5)



6)



7)



8)



9)



Name: \_\_\_\_\_

Date: \_\_\_\_\_

# Money

Count the amount in each piggybank and write the answer.

1)



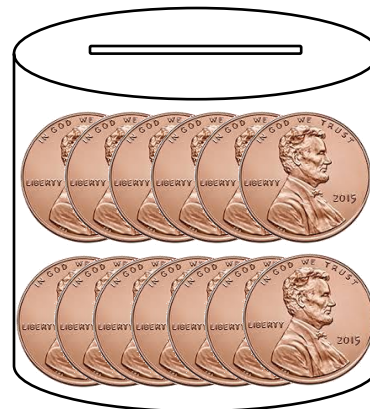
¢8

2)



¢3

3)




¢13

4)



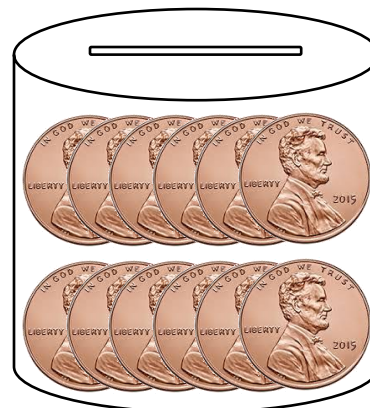
¢2

5)




¢9

6)



¢12

7)



¢10

8)



¢6

9)



¢4