

Money

Name: _____

Date: _____

Money word problems.



\$2



\$3.70



¢10



\$5



\$1



\$1




\$2



\$6.24



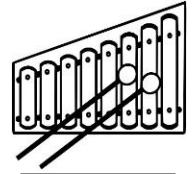
\$7.44



\$5.37



\$2.58



\$8

1) Alia bought a shirt and a brush. How much money does she need to pay?

\$11.14

2) Mary had \$20. She bought a crown. How much money does she have left?

3) Anne buys a hat and teddy. She has a coupon worth \$8.49. How much money does she need to pay?

4) Alice has enough money to buy a cheapest thing. How much money does she need to buy a costliest thing?

5) Agustin bought a xylophone, balloon and crown. How much money does he pay?

6) The sales man sold 5 teddies and 2 balls. How much money did he make on those?

Money

Name: _____

Date: _____

Money word problems.



\$2



\$3.70



¢10



\$5



\$1



\$1




\$2



\$6.24



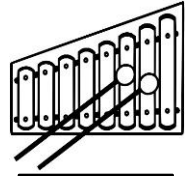
\$7.44



\$5.37



\$2.58



\$8

- 1) Alia bought a shirt and a brush. How much money does she need to pay?
- 2) Mary had \$20. She bought a crown. How much money does she have left?
- 3) Anne buys a hat and teddy. She has a coupon worth \$8.49. How much money does she need to pay?
- 4) Alice has enough money to buy a cheapest thing. How much money does she need to buy a costliest thing?
- 5) Agustin bought a xylophone, balloon and crown. How much money does he pay?
- 6) The sales man sold 5 teddies and 2 balls. How much money did he make on those?

\$11.14

\$13.76

\$1.88

\$7.90

\$15.24

\$25.20