


# Money

Name: \_\_\_\_\_

Date: \_\_\_\_\_

## Money word problems.



\$9.38



\$24.78



\$33.63



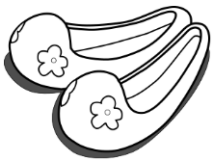
\$23



\$1




\$5



\$10.99



\$2



\$300



\$4.50



\$8.95



\$9.75


- 1) Gale bought a clock and a tie. How much money does he need to pay?
- 2) Agustin had \$90. He bought a purse. How much money does he have left?
- 3) Barbara buys a doll and overalls. She has a coupon worth \$5.18. How much money does she need to pay?
- 4) Karol has enough money to buy a cheapest thing. How much money does she need to buy a costliest thing?
- 5) Anne bought a tie, pant and umbrella. How much money does he pay?
- 6) The sales man sold 10 ice creams and 12 dolls. How much money did he make on those?

# Money

Name: \_\_\_\_\_

Date: \_\_\_\_\_

## Money word problems.



\$9.38



\$24.78



\$33.63




\$23



\$1




\$5



\$10.99



\$2



\$300



\$4.50



\$8.95



\$9.75

1) Gale bought a clock and a tie. How much money does he need to pay?

\$18.70

2) Agustin had \$90. He bought a purse. How much money does he have left?

\$56.37

3) Barbara buys a doll and overalls. She has a coupon worth \$5.18. How much money does she need to pay?

\$8.70

4) Karol has enough money to buy a cheapest thing. How much money does she need to buy a costliest thing?

\$299

5) Anne bought a tie, pant and umbrella. How much money does he pay?

\$38.73

6) The sales man sold 10 ice creams and 12 dolls. How much money did he make on those?

\$74