

Name: _____

Date: _____

Rounding Money

Round the cost of each item to the nearest dollar.

1)



\$20.47

2)



\$24.69

3)



\$11.32

4)



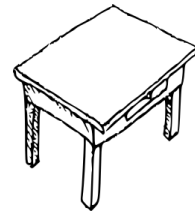
\$299.78

5)



\$9.23

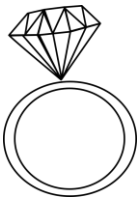
6)



\$120.18

Round the cost of each item to the nearest ten dollars.

1)



\$153.70

2)



62.75

3)




\$1,218.87

4)



\$82.34

5)



\$104.56

6)



\$21.40

Name: _____

Date: _____

Rounding Money

Round the cost of each item to the nearest dollar.

1)



\$20.47

\$20

2)



\$24.69

\$25


3)



\$11.32

\$11

4)



\$299.78

\$300

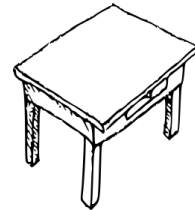
5)



\$9.23

\$9

6)

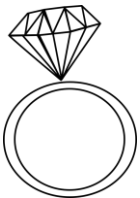


\$120.18

\$120

Round the cost of each item to the nearest ten dollars.

1)



\$153.70

\$150

2)



62.75

\$60

3)



\$1,218.87

\$1,220


4)



\$82.34

\$80

5)



\$104.56

\$100

6)



\$21.40

\$20