

Name: _____

Date: _____

Rounding Money

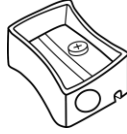
Round the cost of each item to the nearest dollar.

1)



\$31.74

2)



\$2.33

3)



\$15.18

4)



\$23.89

5)



\$5.74

6)



\$13.68


Round the cost of each item to the nearest ten dollars.

1)




\$348.99

2)




\$374.23

3)



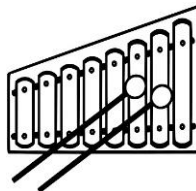
\$43.56

4)



\$388.54

5)



\$8.61

6)



\$37.12

Name: _____

Date: _____

Rounding Money

Round the cost of each item to the nearest dollar.

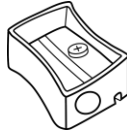
1)



\$31.74

\$32

2)



\$2.33

\$2

3)



\$15.18

\$15

4)



\$23.89

\$24

5)



\$5.74

\$6

6)



\$13.68

\$14

Round the cost of each item to the nearest ten dollars.


1)



\$348.99

\$350


2)



\$374.23

\$370

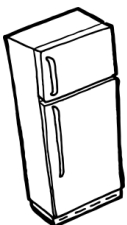
3)



\$43.56

\$40

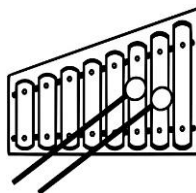
4)



\$388.54

\$390

5)



\$8.61

\$10

6)



\$37.12

\$40