



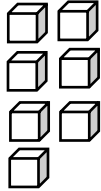
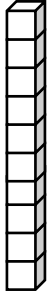
Name: _____

Date: _____

Place Value

Write the number shown by the base ten blocks.


1)



Tens

Ones



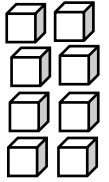
2)



Tens

Ones



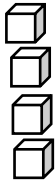
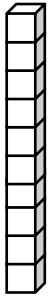
3)



Tens

Ones

4)



Tens

Ones



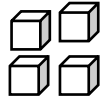
5)



Tens

Ones



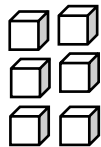
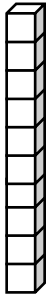
6)



Tens

Ones

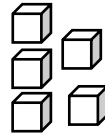
7)



Tens

Ones



8)



Tens

Ones

9)



Tens

Ones

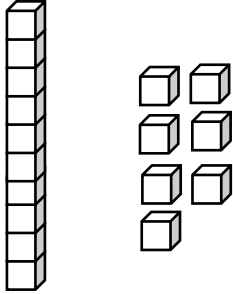
Name: _____

Date: _____

Place Value

Write the number shown by the base ten blocks.

1)



1	7
---	---

Tens Ones

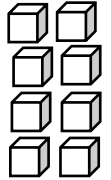
2)



0	1
---	---

Tens Ones

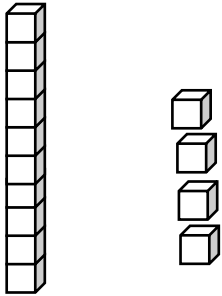
3)



0	8
---	---

Tens Ones

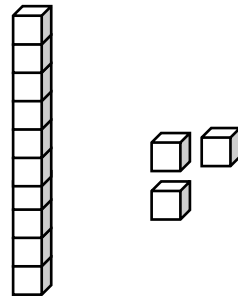
4)



1	4
---	---

Tens Ones

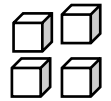
5)



1	3
---	---

Tens Ones

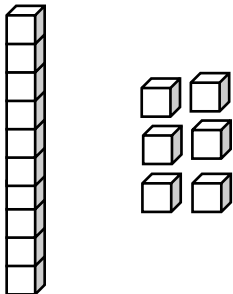
6)



0	4
---	---

Tens Ones

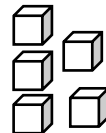
7)



1	6
---	---

Tens Ones

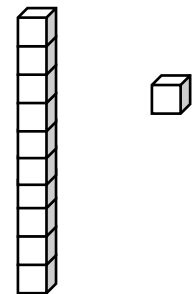
8)



0	5
---	---

Tens Ones

9)



1	1
---	---

Tens Ones