

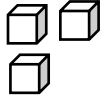
Name: _____

Date: _____

Place Value

Write the number shown by the base ten blocks.

1)



--	--

Tens Ones

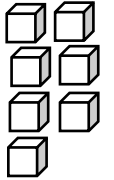
2)



--	--

Tens Ones

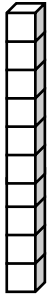
3)



--	--

Tens Ones

4)



--	--

Tens Ones

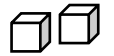
5)



--	--

Tens Ones

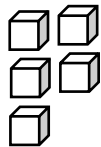
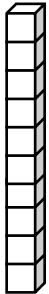
6)



--	--

Tens Ones

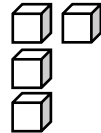
7)



--	--

Tens Ones

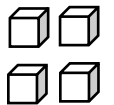
8)



--	--

Tens Ones

9)



--	--

Tens Ones

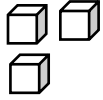
Name: _____

Date: _____

Place Value

Write the number shown by the base ten blocks.

1)



0	3
---	---

Tens Ones

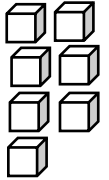
2)



1	1
---	---

Tens Ones

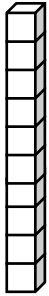
3)



0	7
---	---

Tens Ones

4)



1	3
---	---

Tens Ones

5)



1	2
---	---

Tens Ones

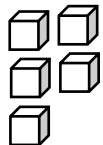
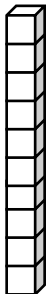
6)



0	2
---	---

Tens Ones

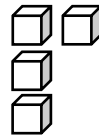
7)



1	5
---	---

Tens Ones

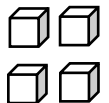
8)



0	4
---	---

Tens Ones

9)



1	4
---	---

Tens Ones