

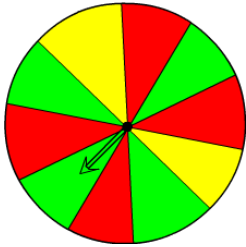
Probability

Name: _____

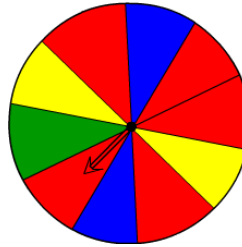
Date: _____

Spinning Probability

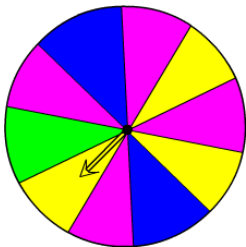
- 1) Which two colours is the spinner equally likely to land on?



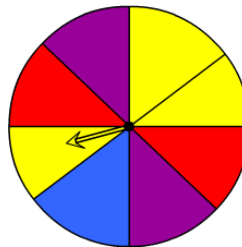
- 2) Which colour is the spinner least likely to land on?



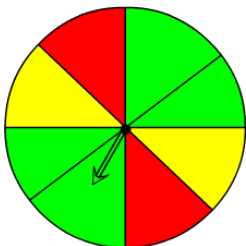
- 3) Which colour is the spinner most likely to land on?



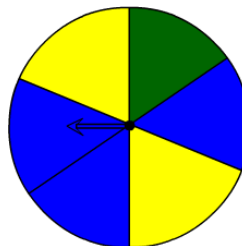
- 4) Which two colours is the spinner equally likely to land on?



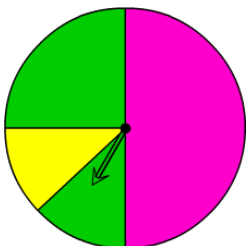
- 5) Which two colours is the spinner equally likely to land on?



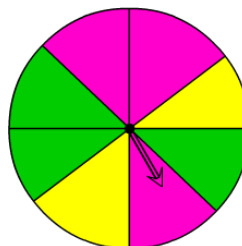
- 6) Which colour is the spinner most likely to land on?



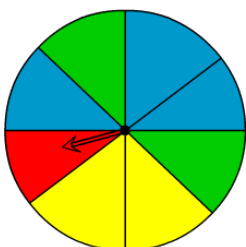
- 7) Which colour is the spinner most likely to land on?



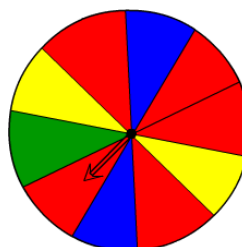
- 8) Which two colours is the spinner equally likely to land on?



- 9) Which colour is the spinner most likely to land on?



- 10) Which two colours is the spinner equally likely to land on?



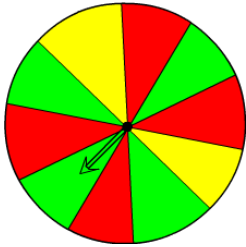
Probability

Name: _____

Date: _____

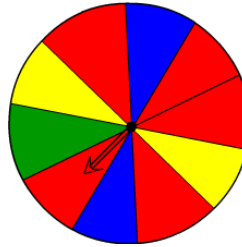
Spinning Probability

- 1) Which two colours is the spinner equally likely to land on?



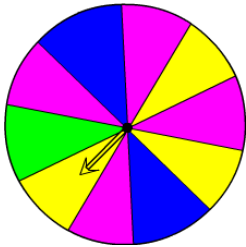
Green & Red

- 2) Which colour is the spinner least likely to land on?



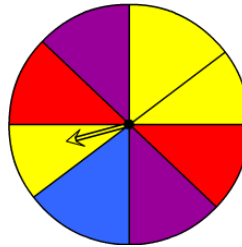
Green

- 3) Which colour is the spinner most likely to land on?



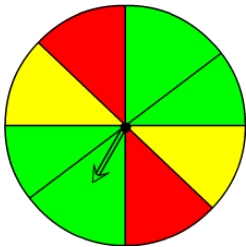
Pink

- 4) Which two colours is the spinner equally likely to land on?



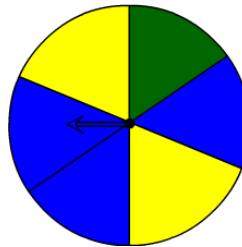
Violet & Red

- 5) Which two colours is the spinner equally likely to land on?



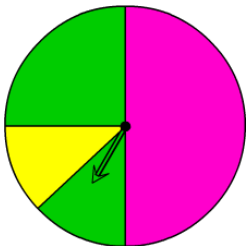
Red & Yellow

- 6) Which colour is the spinner most likely to land on?



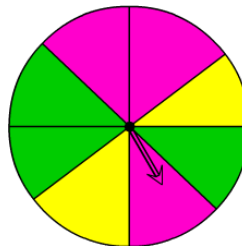
Green

- 7) Which colour is the spinner most likely to land on?



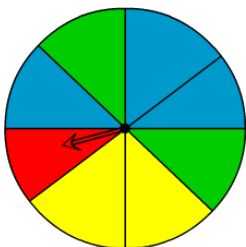
Pink

- 8) Which two colours is the spinner equally likely to land on?



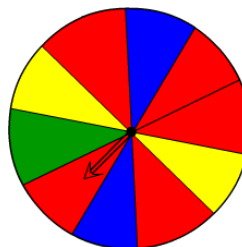
Pink & Green

- 9) Which colour is the spinner most likely to land on?



Blue

- 10) Which two colours is the spinner equally likely to land on?



Blue & Yellow