

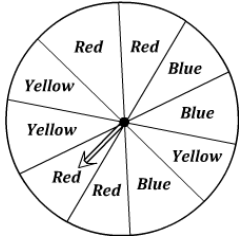
Probability

Name: _____

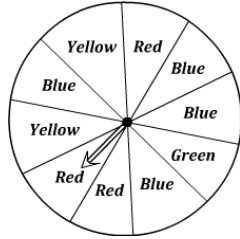
Date: _____

Spinning Probability

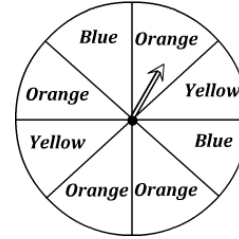
1) What is the probability of **not** spinning blue?



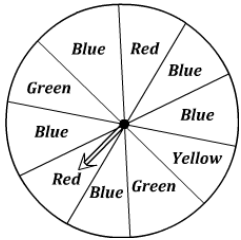
2) What is the probability of spinning yellow or red?



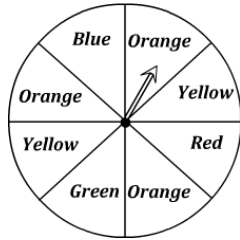
3) What is the probability of the spinner **not** landing on orange?



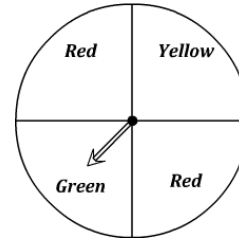
4) What is the probability of the spinner **not** landing on a primary colour?



5) What is the probability of the spinner landing on blue or yellow?

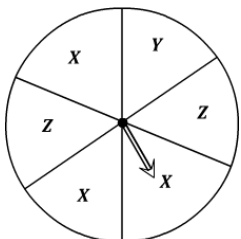


6) What is the probability of the spinner landing on green?

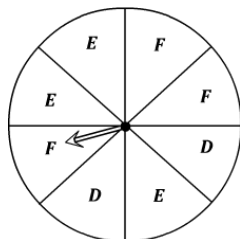


Spinning Probability

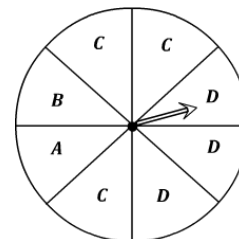
1) What is the probability of the spinner **not** landing on a letter X?



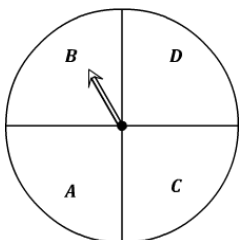
2) What is the probability of the spinner landing on a letter E?



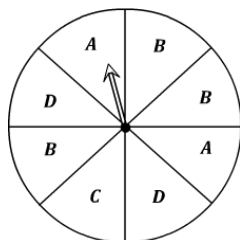
3) What is the probability of **not** spinning on a letter A or C?



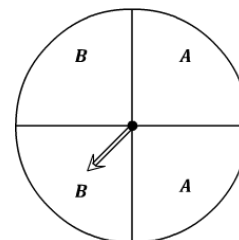
4) What is the probability of the spinner landing on a letter D?



5) What is the probability of the spinner landing on a letter C or D?



6) What is the probability of the spinner landing on a letter B?



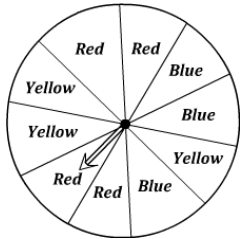
Probability

Name: _____

Date: _____

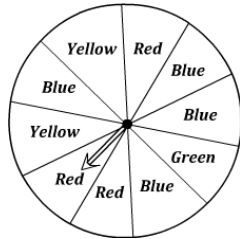
Spinning Probability

- 1) What is the probability of **not** spinning blue?



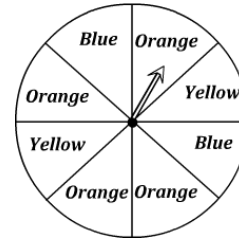
7 out of 10

- 2) What is the probability of spinning yellow or red?



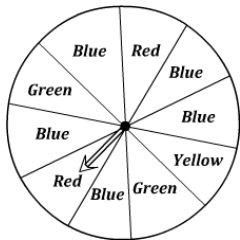
5 out of 10

- 3) What is the probability of the spinner **not** landing on orange?



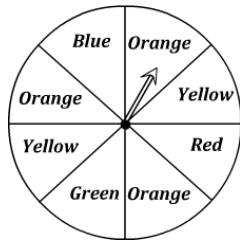
4 out of 8

- 4) What is the probability of the spinner **not** landing on a primary colour?



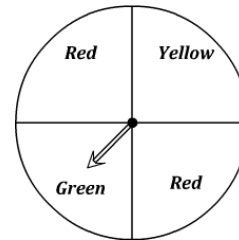
1 out of 10

- 5) What is the probability of the spinner landing on blue or yellow?



3 out of 8

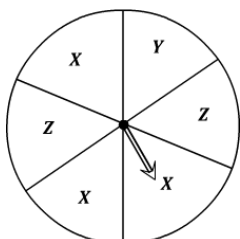
- 6) What is the probability of the spinner landing on green?



1 out of 4

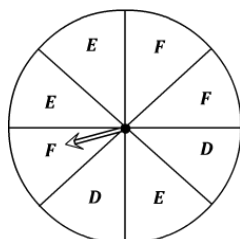
Spinning Probability

- 1) What is the probability of the spinner **not** landing on a letter X?



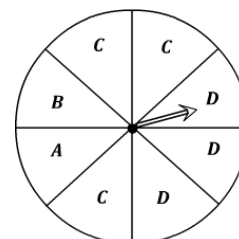
3 out of 6

- 2) What is the probability of the spinner landing on a letter E?



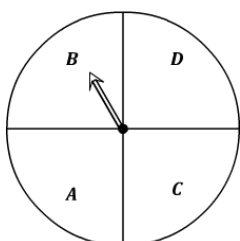
3 out of 8

- 3) What is the probability of **not** spinning on a letter A or C?



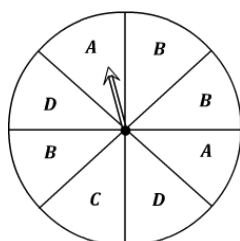
4 out of 8

- 4) What is the probability of the spinner landing on a letter D?



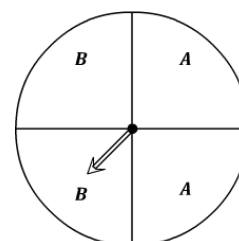
1 out of 4

- 5) What is the probability of the spinner landing on a letter C or D?



3 out of 8

- 6) What is the probability of the spinner landing on a letter B?



2 out of 4