




Finding Ratios


Name: _____





Date: _____


Find each ratio and simplify.




Simplest form


1.  What is the ratio of  to  ? = : = :





 = : = :


 What is the ratio of  to ( + )? = : = :


 = : = :




2.  What is the ratio of  to  ? = : = :


 = : = :





 What is the ratio of  to ( + )? = : = :


 = : = :




 = : = :


3.  What is the ratio of  to  ? = : = :





 = : = :


 What is the ratio of  to ( + )? = : = :

 = : = :

4.  What is the ratio of  to  ? = : = :

 = : = :

 What is the ratio of  to ( + )? = : = :


 = : = :



Finding Ratios




Name: _____


Date: _____



Find each ratio and simplify.




1.  Simplest form


What is the ratio of  to  ? = $\frac{24}{4} : \frac{4}{4} = \frac{6}{1} : \frac{1}{1}$



What is the ratio of  to ( + )? = $\frac{24}{28} : \frac{4}{28} = \frac{6}{7} : \frac{1}{7}$




2. 

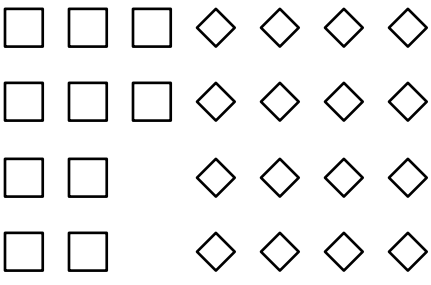
What is the ratio of  to  ? = $\frac{12}{14} : \frac{6}{14} = \frac{6}{7} : \frac{3}{7}$



What is the ratio of  to ( + )? = $\frac{12}{26} : \frac{6}{26} = \frac{6}{13} : \frac{3}{13}$




3. 

What is the ratio of  to  ? = $\frac{12}{10} : \frac{10}{10} = \frac{6}{5} : \frac{1}{1}$

What is the ratio of  to ( + )? = $\frac{12}{22} : \frac{10}{22} = \frac{6}{11} : \frac{5}{11}$

4. 

What is the ratio of  to  ? = $\frac{16}{10} : \frac{10}{10} = \frac{8}{5} : \frac{1}{1}$

What is the ratio of  to ( + )? = $\frac{16}{26} : \frac{10}{26} = \frac{8}{13} : \frac{5}{13}$