

Finding Ratios

Name: _____

Date: _____

Solve each problem.


1. What is the ratio of stars to hearts?




2. What is the ratio of circles to pentagons?



3. What is the ratio of moons to cross?



4. What is the ratio of parallelograms to hexagons?



5. What is the ratio of squares to triangles?



Finding Ratios

Name: _____

Date: _____

Solve each problem.

1. What is the ratio of stars to hearts?




2 : 3

2. What is the ratio of circles to pentagons?




2 : 1

3. What is the ratio of moons to cross?



4 : 3

4. What is the ratio of parallelograms to hexagons?



5 : 2

5. What is the ratio of squares to triangles?



3 : 1