


Finding Ratios

Name: _____


Date: _____

Solve each problem.


1. What is the ratio of moons to pentagons?




2. What is the ratio of cross to diamonds?




3. What is the ratio of diamonds to circles?



4. What is the ratio of triangles to hexagons?



5. What is the ratio of hearts to squares?




Finding Ratios

Name: _____

Date: _____


Solve each problem.

1. What is the ratio of moons to pentagons?




8 : 6

2. What is the ratio of cross to diamonds?




10 : 5

3. What is the ratio of diamonds to circles?




8 : 8

4. What is the ratio of triangles to hexagons?



6 : 10

5. What is the ratio of hearts to squares?



8 : 10