

Name: _____

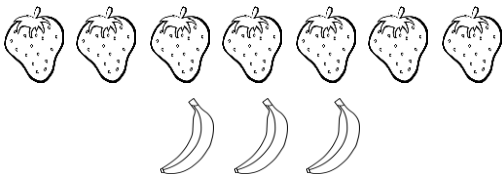
Date: _____

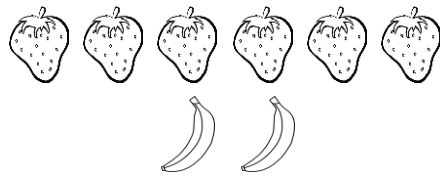
Ratio: Part to Part

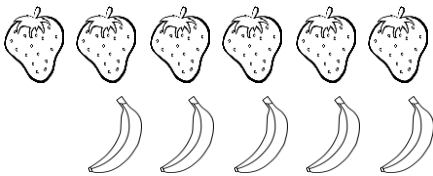
Write the ratio of strawberries to bananas.

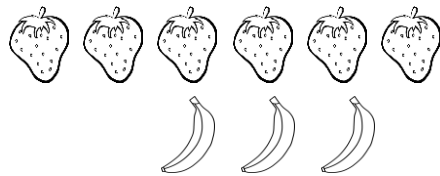
















Find each ratio and simplify, if necessary.



The Ratio of  to  = _____ = _____





The Ratio of  to  = _____ = _____



The Ratio of  to  = _____ = _____



The Ratio of  to  = _____ = _____

Name: _____

Date: _____

Ratio: Part to Part

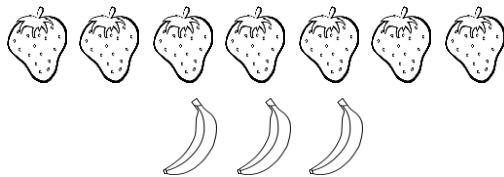
Write the ratio of strawberries to bananas.



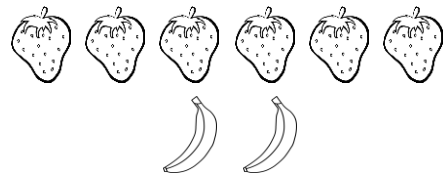
3 : 2



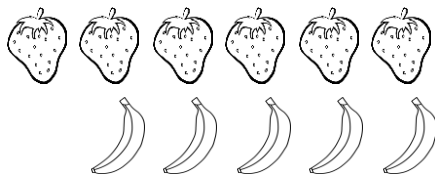
2 : 4



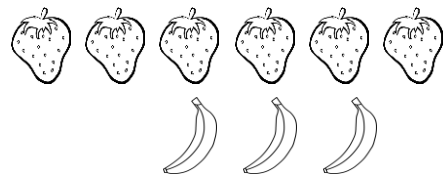
7 : 3



6 : 2



6 : 5



6 : 3

Find each ratio and simplify, if necessary.



The Ratio of  to  = 8 to 6 = 4 to 3



The Ratio of  to  = 5 to 5 = 1 to 1



The Ratio of  to  = 10 to 2 = 5 to 1



The Ratio of  to  = 2 to 3