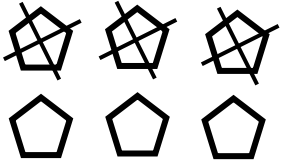



Name: _____

Date: _____

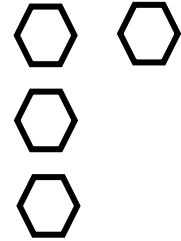
Subtraction




$$6 - 3 = \underline{3}$$



$$5 - 2 = \underline{\quad}$$



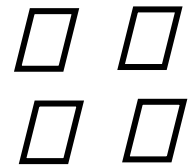
$$4 - 1 = \underline{\quad}$$



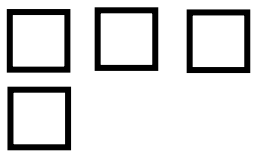
$$6 - 1 = \underline{\quad}$$



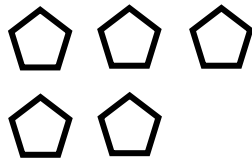
$$3 - 3 = \underline{\quad}$$



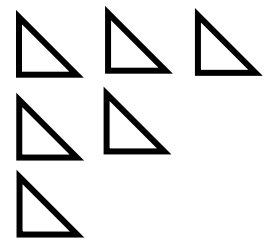
$$4 - 3 = \underline{\quad}$$



$$4 - 2 = \underline{\quad}$$



$$5 - 4 = \underline{\quad}$$

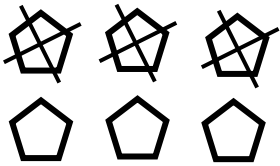


$$6 - 5 = \underline{\quad}$$

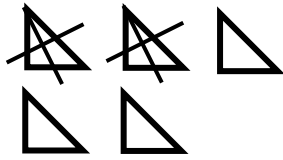
Name: _____

Date: _____

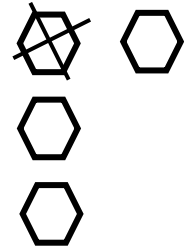
Subtraction




$$6 - 3 = \underline{3}$$



$$5 - 2 = \underline{3}$$




$$4 - 1 = \underline{3}$$



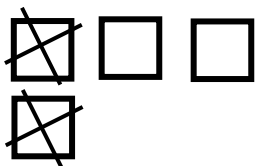
$$6 - 1 = \underline{5}$$



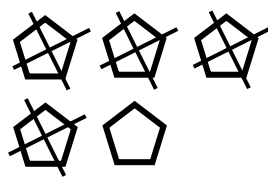
$$3 - 3 = \underline{0}$$



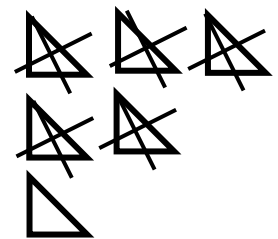
$$4 - 3 = \underline{1}$$



$$4 - 2 = \underline{2}$$



$$5 - 4 = \underline{1}$$



$$6 - 5 = \underline{1}$$