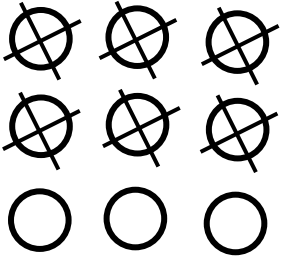



Name: _____

Date: _____


Subtraction




$$9 - 6 = \underline{3}$$




$$9 - 2 = \underline{\quad}$$




$$9 - 5 = \underline{\quad}$$




$$9 - 4 = \underline{\quad}$$




$$9 - 1 = \underline{\quad}$$




$$9 - 8 = \underline{\quad}$$



$$9 - 7 = \underline{\quad}$$



$$9 - 9 = \underline{\quad}$$

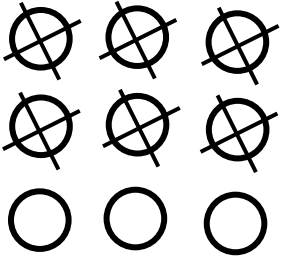


$$9 - 3 = \underline{\quad}$$

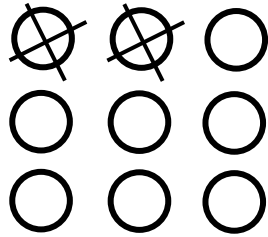
Name: _____

Date: _____

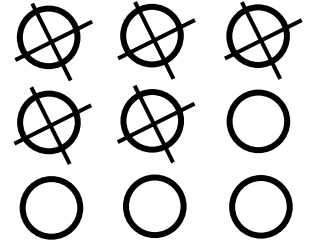
Subtraction



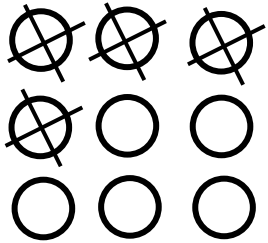
$$9 - 6 = \underline{3}$$



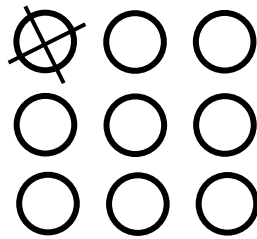
$$9 - 2 = \underline{7}$$




$$9 - 5 = \underline{4}$$



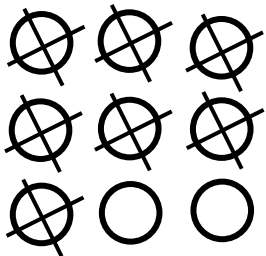
$$9 - 4 = \underline{5}$$




$$9 - 1 = \underline{8}$$



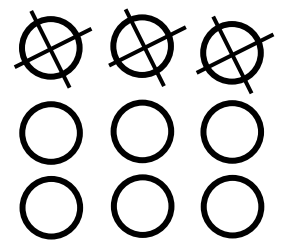
$$9 - 8 = \underline{1}$$



$$9 - 7 = \underline{2}$$



$$9 - 9 = \underline{0}$$



$$9 - 3 = \underline{6}$$