

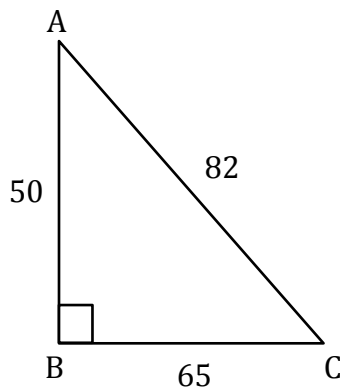
Trigonometric Ratios

Name: _____

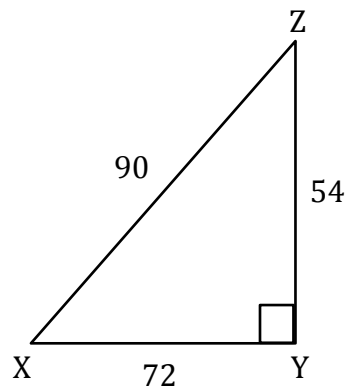
Date: _____

Solving trigonometry ratios

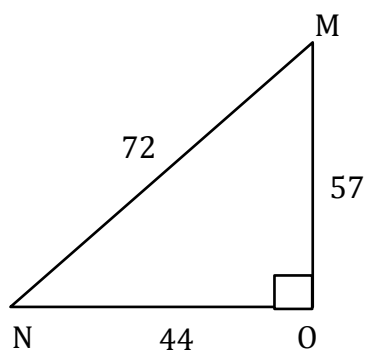
1) $\sin A = \frac{65}{82}$



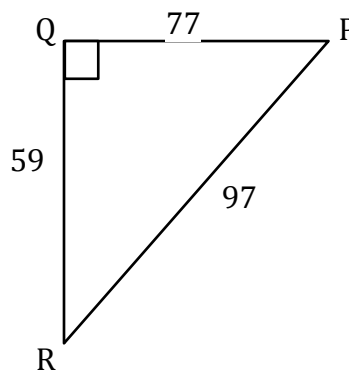
2) $\sin X =$ _____



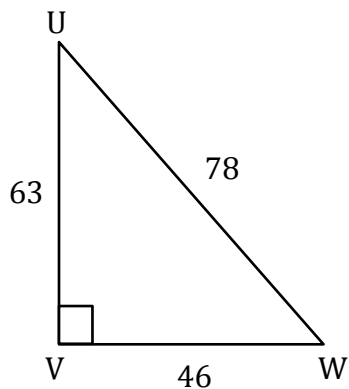
3) $\sin M =$ _____



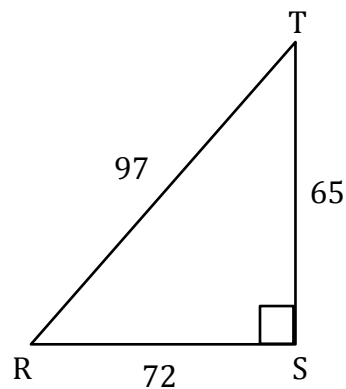
4) $\sin P =$ _____



5) $\sin W =$ _____



6) $\sin R =$ _____



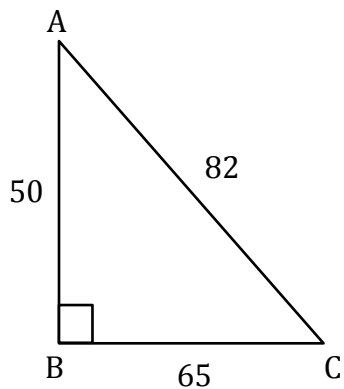
Trigonometric Ratios

Name: _____

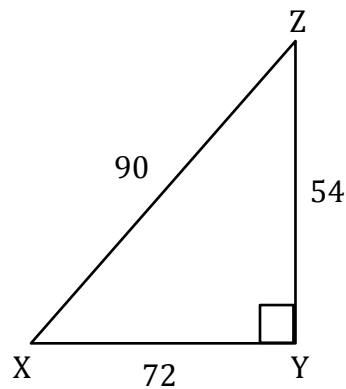
Date: _____

Solving trigonometry ratios

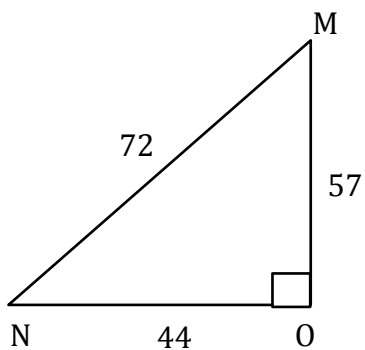
1) $\sin A = \frac{65}{82}$



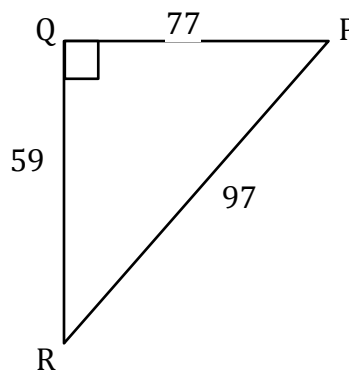
2) $\sin X = \frac{54}{90}$



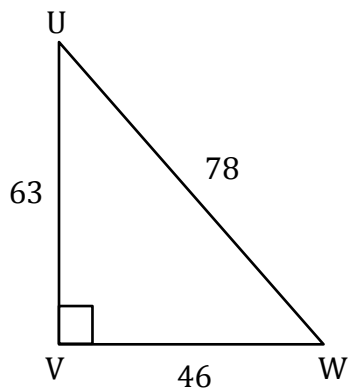
3) $\sin M = \frac{44}{72}$



4) $\sin P = \frac{59}{97}$



5) $\sin W = \frac{63}{78}$



6) $\sin R = \frac{65}{97}$

