

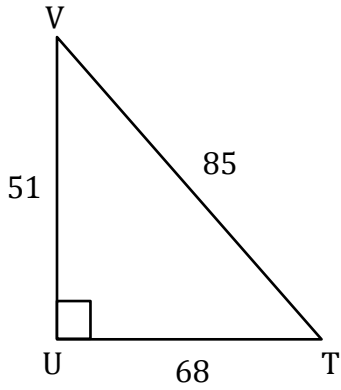
Trigonometric Ratios

Name: _____

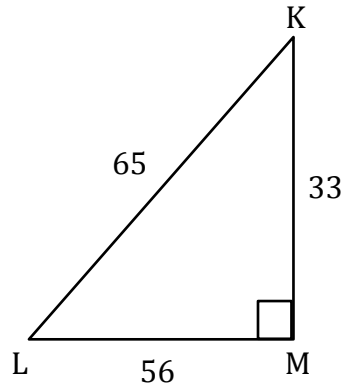
Date: _____

Solving trigonometry ratios

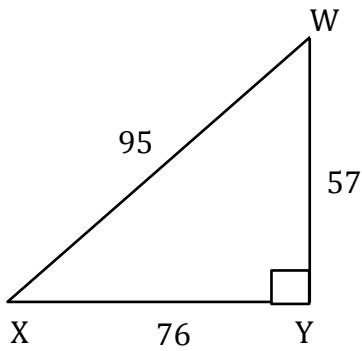
1) $\sin V =$ _____



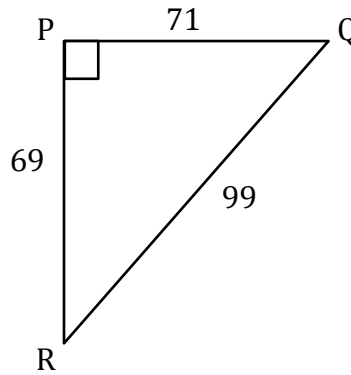
2) $\tan K =$ _____



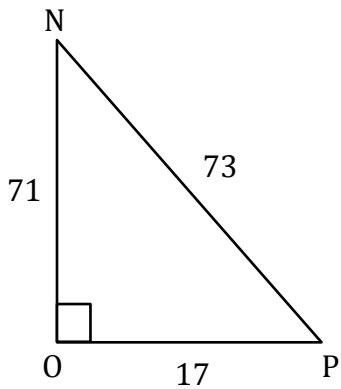
3) $\tan X =$ _____



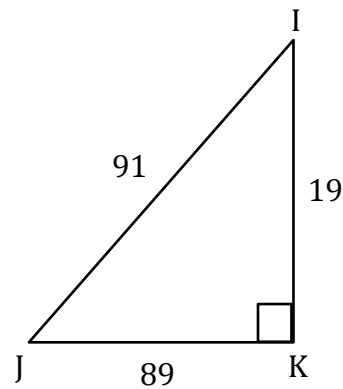
4) $\sin Q =$ _____



5) $\cos N =$ _____



6) $\cos I =$ _____



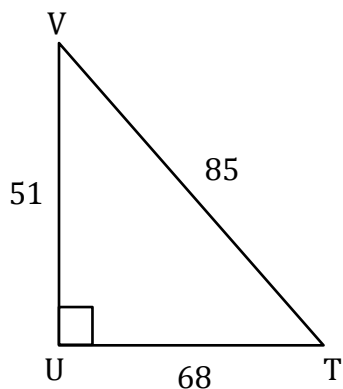
Trigonometric Ratios

Name: _____

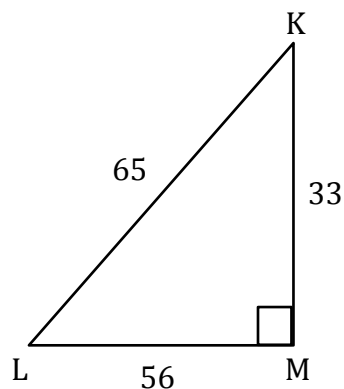
Date: _____

Solving trigonometry ratios

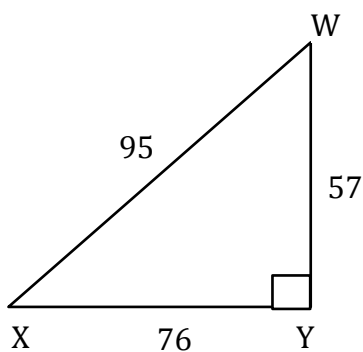
1) $\sin V = \frac{68}{85}$



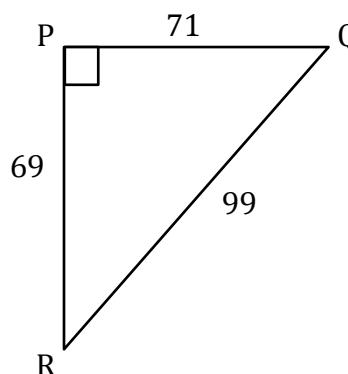
2) $\tan K = \frac{56}{33}$



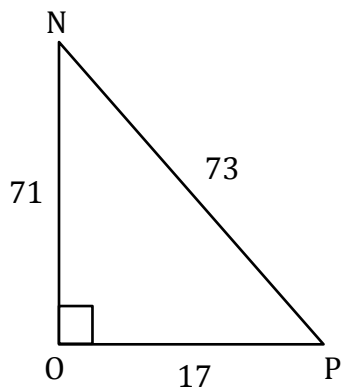
3) $\tan X = \frac{57}{76}$



4) $\sin Q = \frac{69}{99}$



5) $\cos N = \frac{71}{73}$



6) $\cos I = \frac{19}{91}$

