

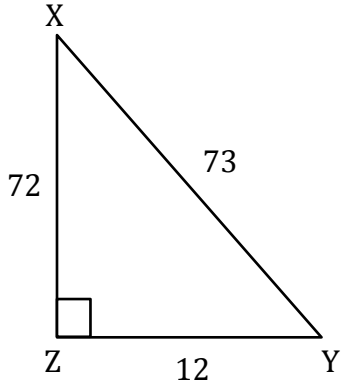
Trigonometric Ratios

Name: _____

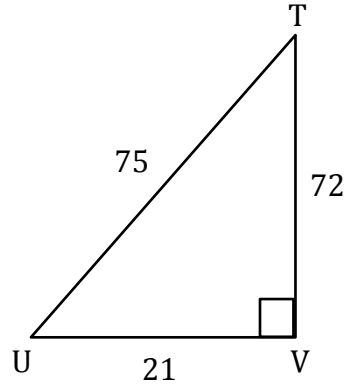
Date: _____

Solving trigonometry ratios

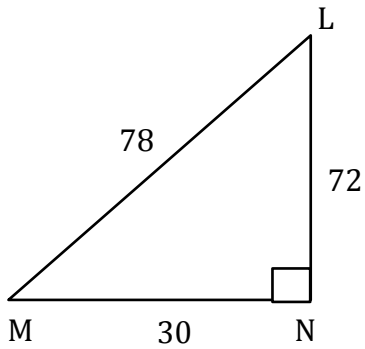
1) $\sec Y = \frac{73}{12}$



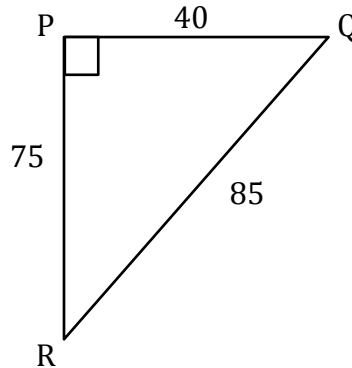
2) $\sec T =$ _____



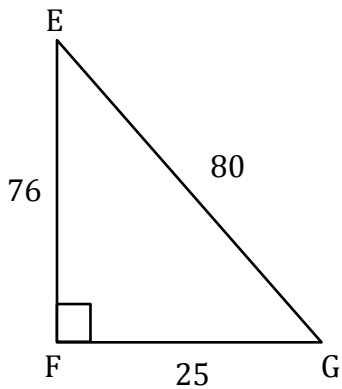
3) $\sec M =$ _____



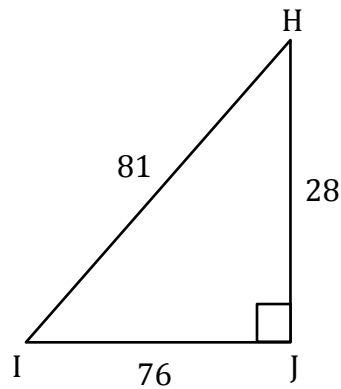
4) $\sec Q =$ _____



5) $\sec E =$ _____



6) $\sec H =$ _____



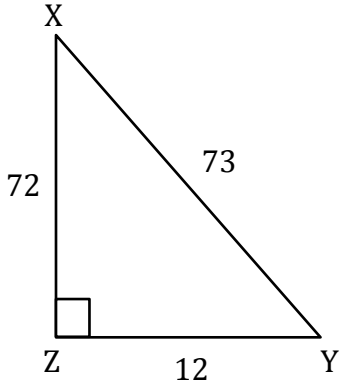
Trigonometric Ratios

Name: _____

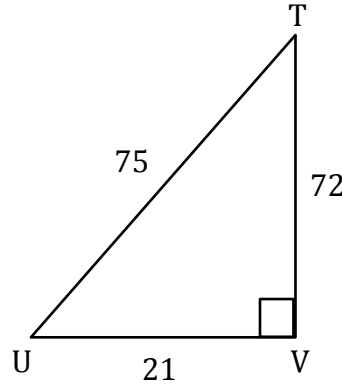
Date: _____

Solving trigonometry ratios

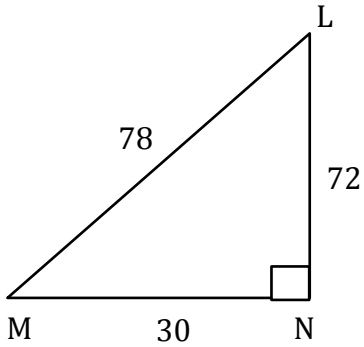
1) $\sec Y = \frac{73}{12}$



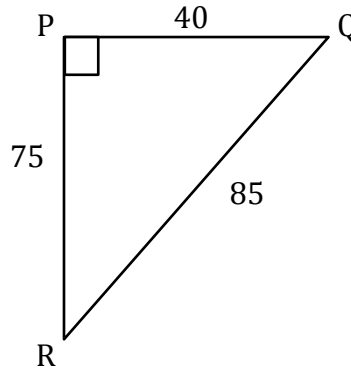
2) $\sec T = \frac{75}{72}$



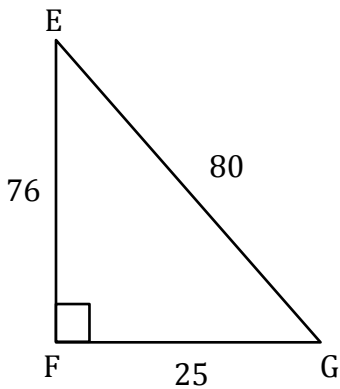
3) $\sec M = \frac{78}{30}$



4) $\sec Q = \frac{85}{40}$



5) $\sec E = \frac{80}{76}$



6) $\sec H = \frac{81}{28}$

