

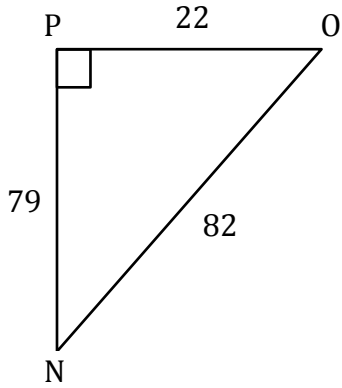
Trigonometric Ratios

Name: _____

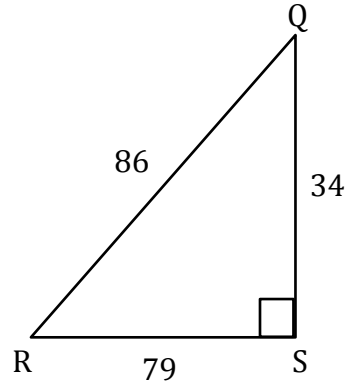
Date: _____

Solving trigonometry ratios

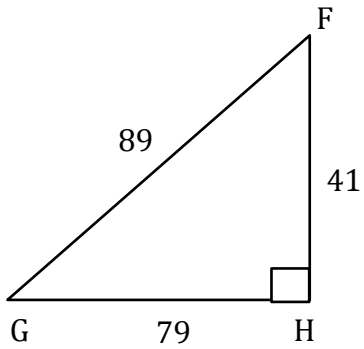
1) $\sec O =$ _____



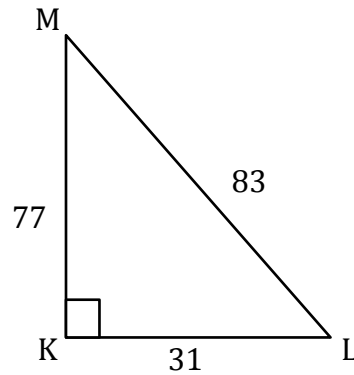
2) $\sec R =$ _____



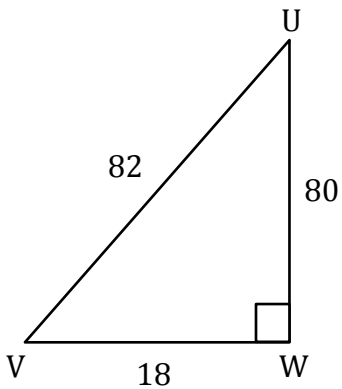
3) $\sec G =$ _____



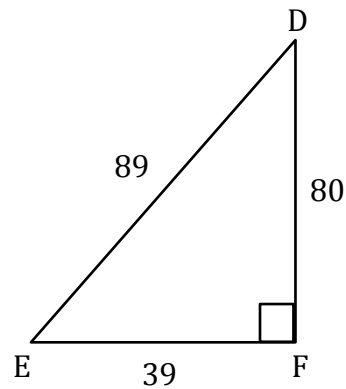
4) $\sec L =$ _____



5) $\sec U =$ _____



6) $\sec E =$ _____



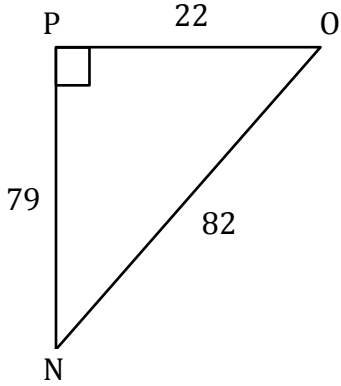
Trigonometric Ratios

Name: _____

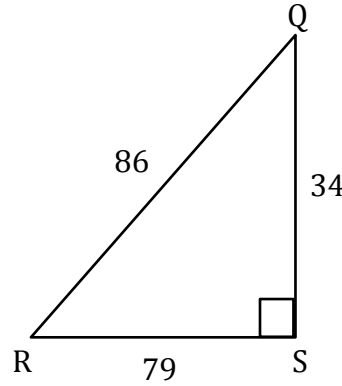
Date: _____

Solving trigonometry ratios

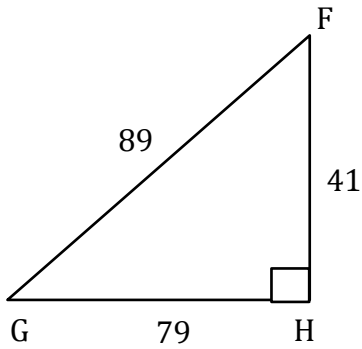
1) $\sec O = \frac{82}{22}$



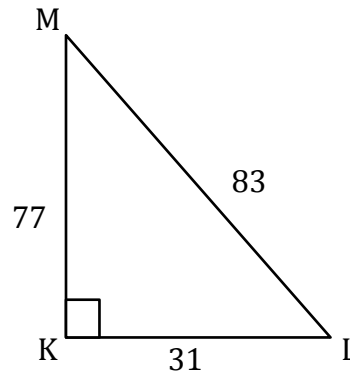
2) $\sec R = \frac{86}{79}$



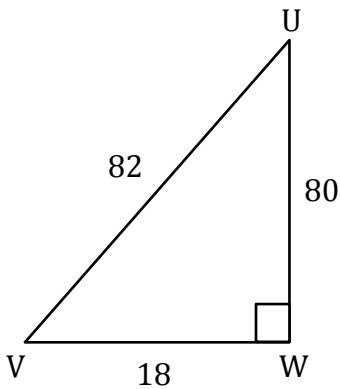
3) $\sec G = \frac{89}{79}$



4) $\sec L = \frac{83}{31}$



5) $\sec U = \frac{82}{80}$



6) $\sec E = \frac{89}{39}$

