

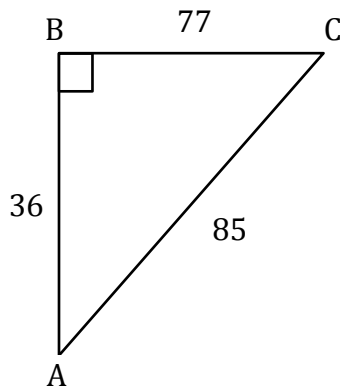
Trigonometric Ratios

Name: _____

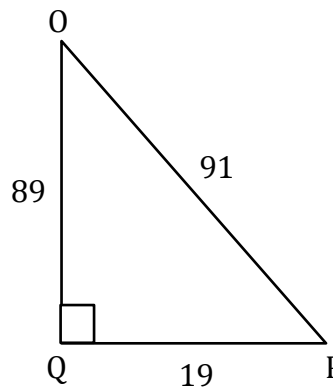
Date: _____

Solving trigonometry ratios

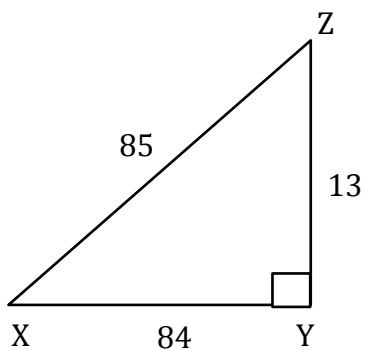
1) $\sec A =$ _____



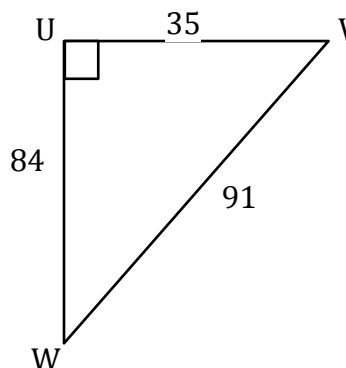
2) $\sec O =$ _____



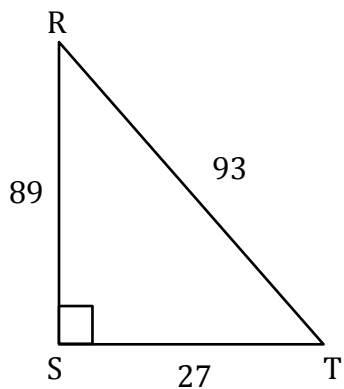
3) $\sec Z =$ _____



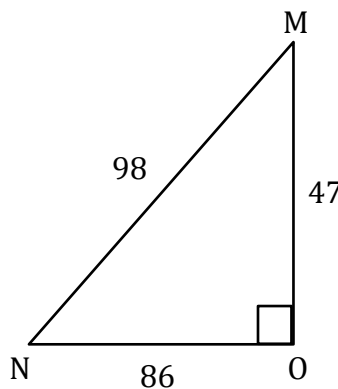
4) $\sec V =$ _____



5) $\sec R =$ _____



6) $\sec M =$ _____



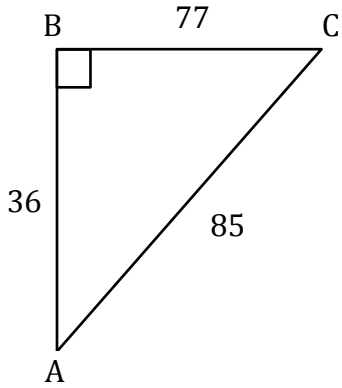
Trigonometric Ratios

Name: _____

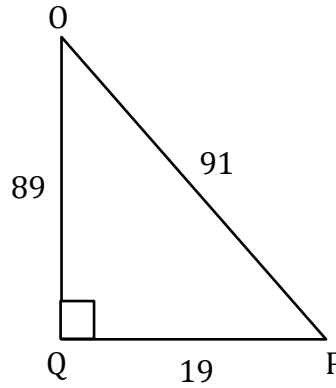
Date: _____

Solving trigonometry ratios

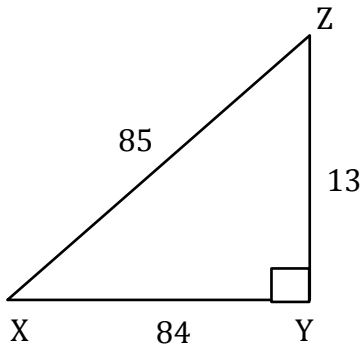
1) $\sec A = \frac{85}{36}$



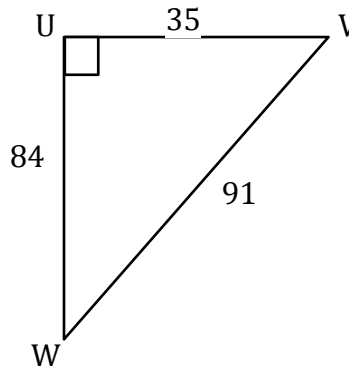
2) $\sec O = \frac{91}{89}$



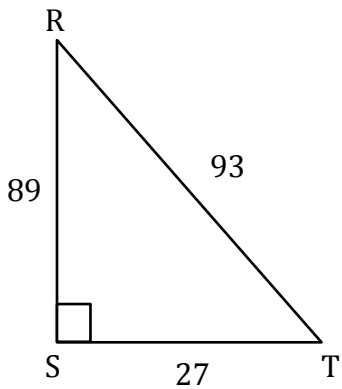
3) $\sec Z = \frac{84}{13}$



4) $\sec V = \frac{91}{35}$



5) $\sec R = \frac{93}{89}$



6) $\sec M = \frac{98}{47}$

