

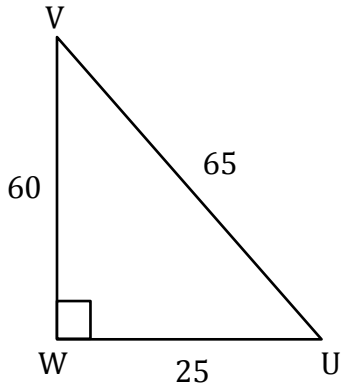
Trigonometric Ratios

Name: _____

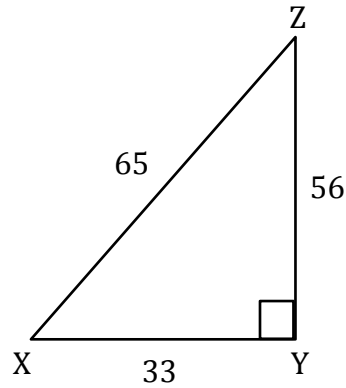
Date: _____

Solving trigonometry ratios

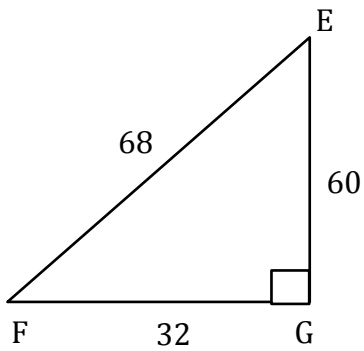
1) $\cot V =$ _____



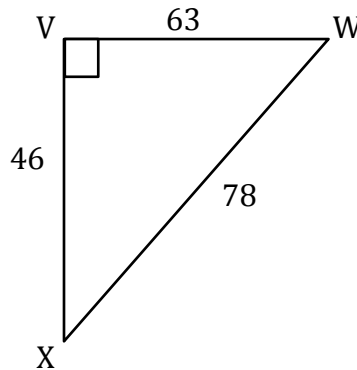
2) $\operatorname{cosec} X =$ _____



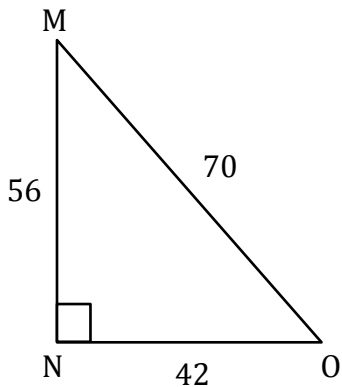
3) $\sec E =$ _____



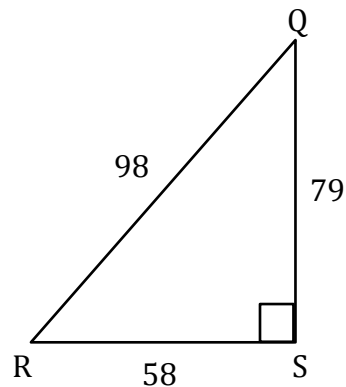
4) $\cot X =$ _____



5) $\operatorname{cosec} M =$ _____



6) $\sec Q =$ _____



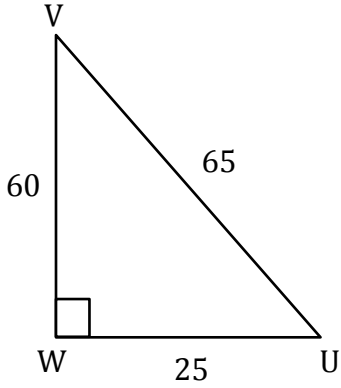
Trigonometric Ratios

Name: _____

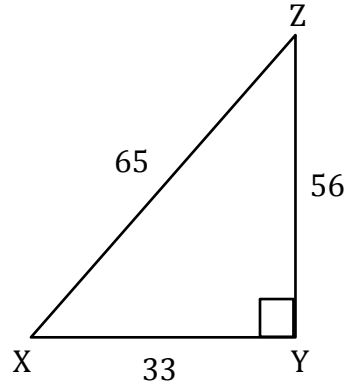
Date: _____

Solving trigonometry ratios

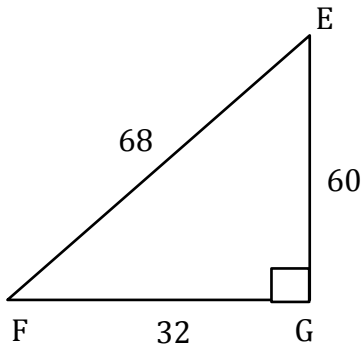
1) $\cot V = \frac{60}{25}$



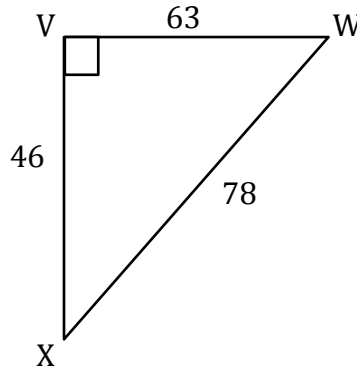
2) $\operatorname{cosec} X = \frac{65}{56}$



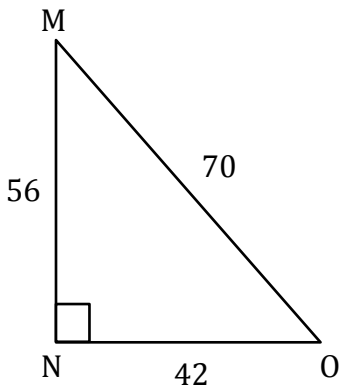
3) $\sec E = \frac{68}{60}$



4) $\cot X = \frac{46}{63}$



5) $\operatorname{cosec} M = \frac{70}{42}$



6) $\sec Q = \frac{98}{79}$

