

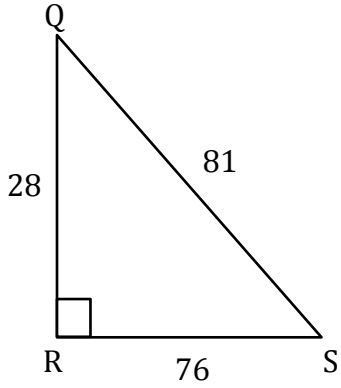
Trigonometric Ratios

Name: _____

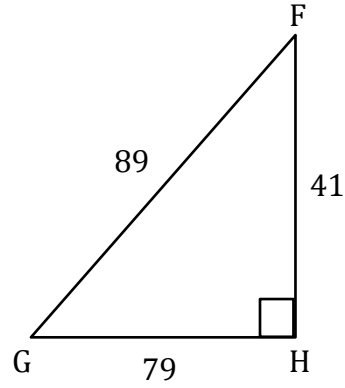
Date: _____

Solving trigonometry ratios

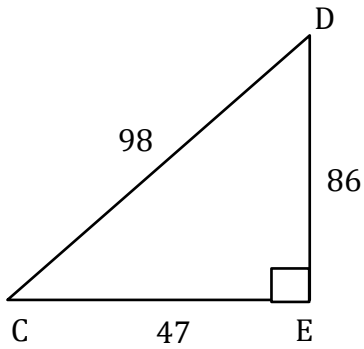
1) $\tan Q = \frac{76}{28}$



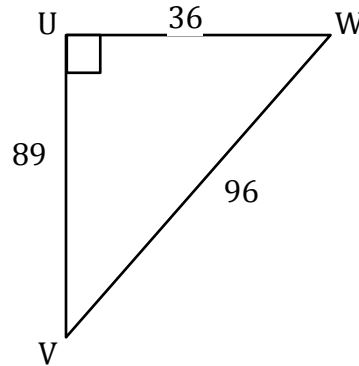
2) $\tan G =$ _____



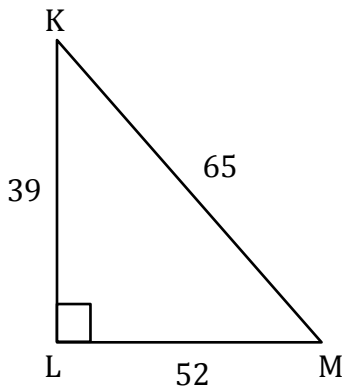
3) $\tan C =$ _____



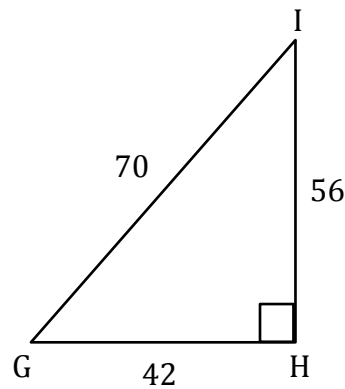
4) $\tan V =$ _____



5) $\tan K =$ _____



6) $\tan G =$ _____



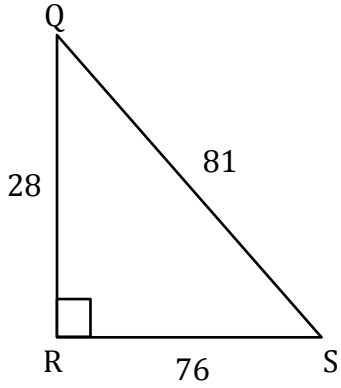
Trigonometric Ratios

Name: _____

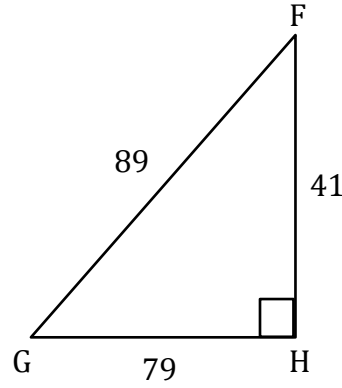
Date: _____

Solving trigonometry ratios

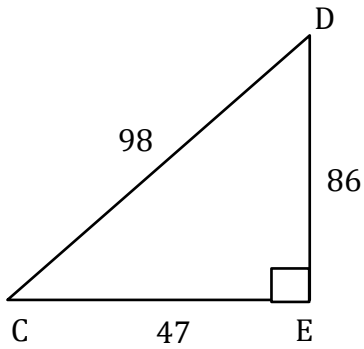
1) $\tan Q = \frac{76}{28}$



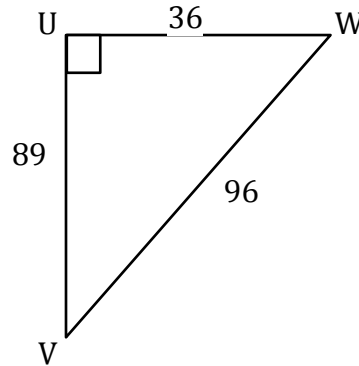
2) $\tan G = \frac{41}{79}$



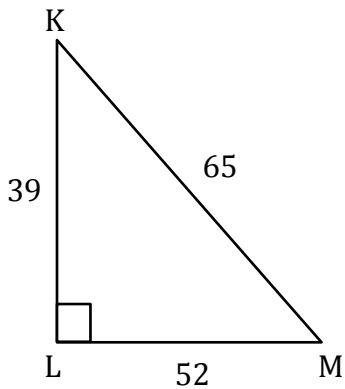
3) $\tan C = \frac{86}{47}$



4) $\tan V = \frac{36}{89}$



5) $\tan K = \frac{52}{39}$



6) $\tan G = \frac{56}{42}$

