

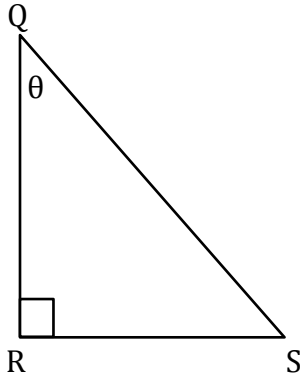
Trigonometry

Name: _____

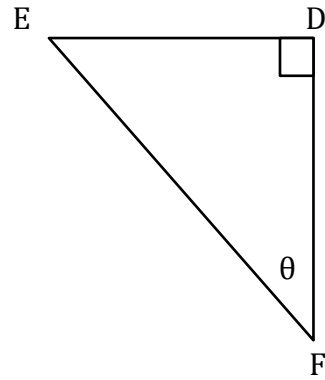
Date: _____

Find the trigonometric ratios.

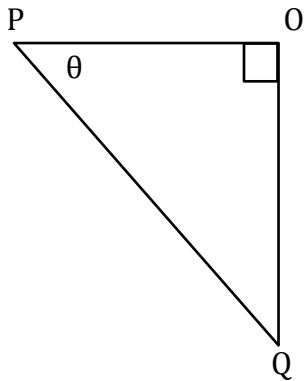
1) $\tan\theta$



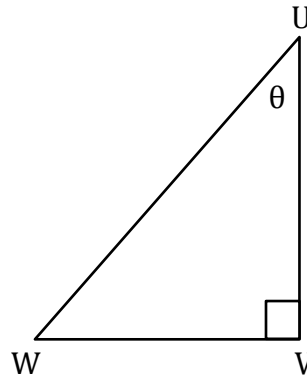
2) $\cos\theta$



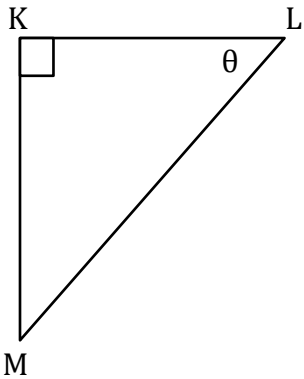
3) $\tan\theta$



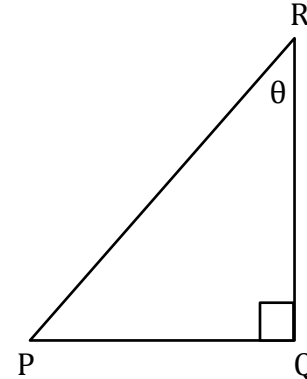
4) $\cos\theta$



5) $\sin\theta$



6) $\sin\theta$



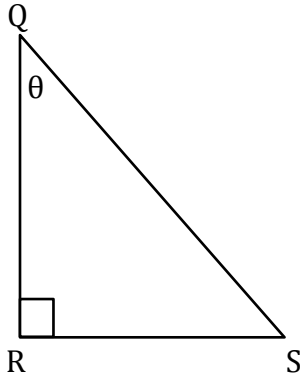
Trigonometry

Name: _____

Date: _____

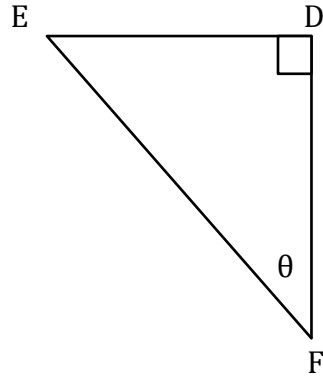
Find the trigonometric ratios.

1) $\tan\theta$



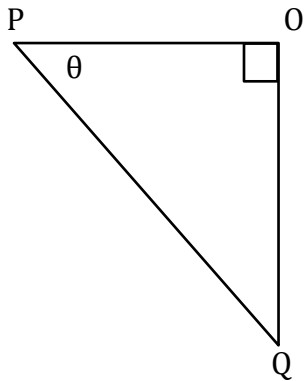
$$\frac{RS}{QR}$$

2) $\cos\theta$



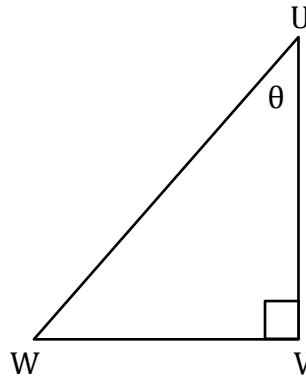
$$\frac{DF}{EF}$$

3) $\tan\theta$



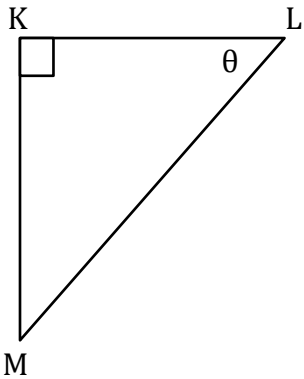
$$\frac{OQ}{PO}$$

4) $\cos\theta$



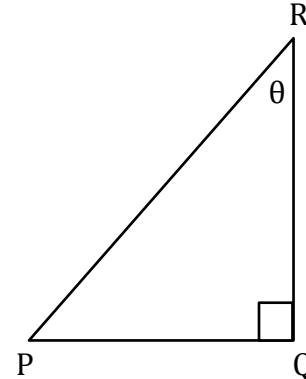
$$\frac{UV}{UW}$$

5) $\sin\theta$



$$\frac{KM}{LM}$$

6) $\sin\theta$



$$\frac{PQ}{PR}$$