

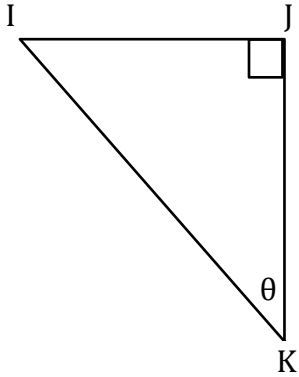
# Trigonometry

Name: \_\_\_\_\_

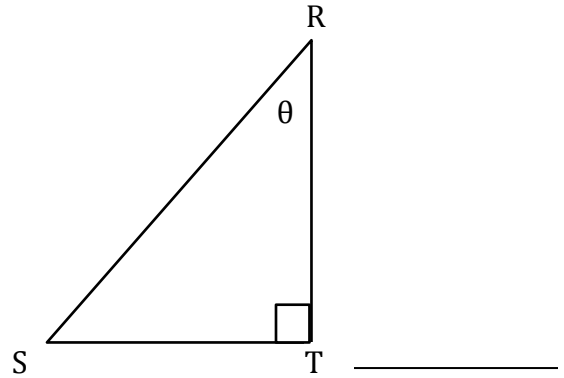
Date: \_\_\_\_\_

Find the trigonometric ratios.

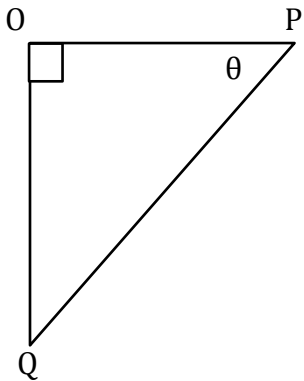
1)  $\sin\theta$



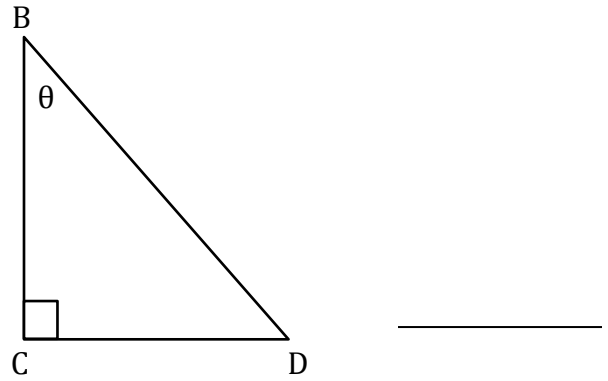
2)  $\tan\theta$



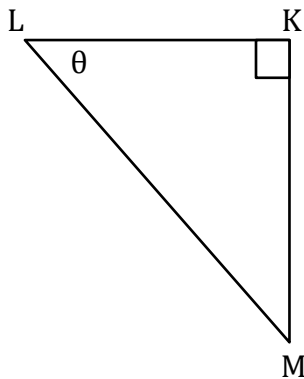
3)  $\cos\theta$



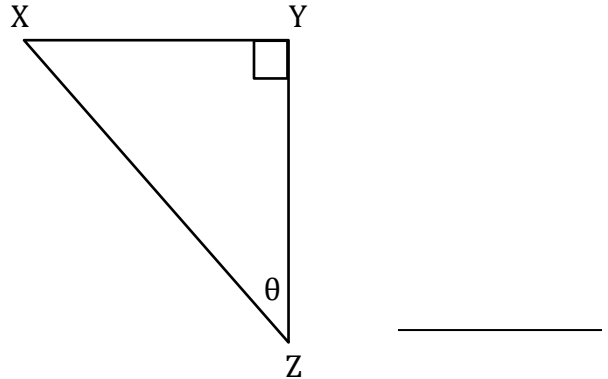
4)  $\sin\theta$



5)  $\tan\theta$



6)  $\cos\theta$



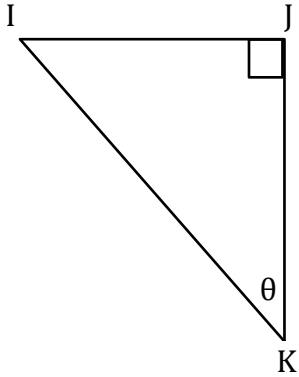
# Trigonometry

Name: \_\_\_\_\_

Date: \_\_\_\_\_

**Find the trigonometric ratios.**

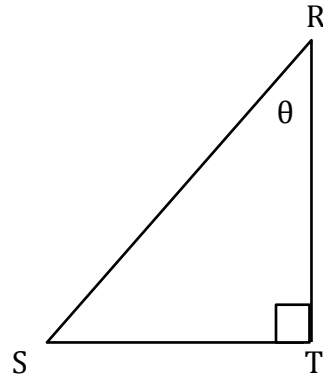
1)  $\sin\theta$



\_\_\_\_\_

$$\frac{IJ}{IK}$$

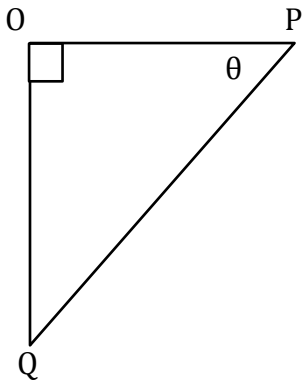
2)  $\tan\theta$



\_\_\_\_\_

$$\frac{ST}{RT}$$

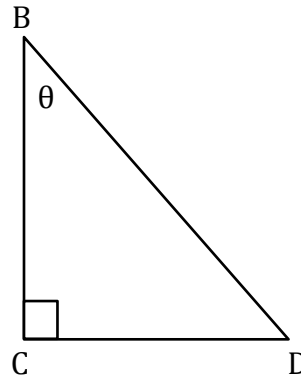
3)  $\cos\theta$



\_\_\_\_\_

$$\frac{OP}{PQ}$$

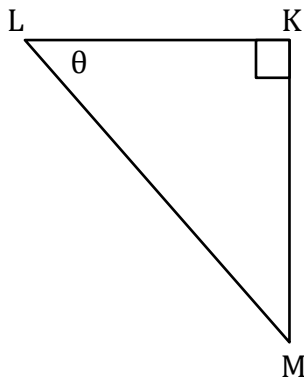
4)  $\sin\theta$



\_\_\_\_\_

$$\frac{CD}{BD}$$

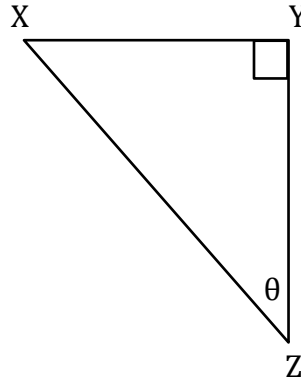
5)  $\tan\theta$



\_\_\_\_\_

$$\frac{KM}{KL}$$

6)  $\cos\theta$



\_\_\_\_\_

$$\frac{YZ}{XZ}$$