

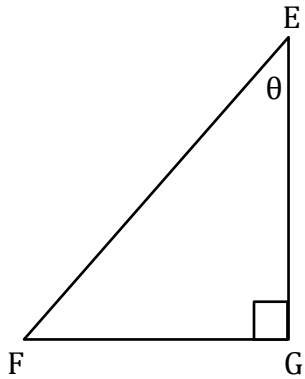
Trigonometry

Name: _____

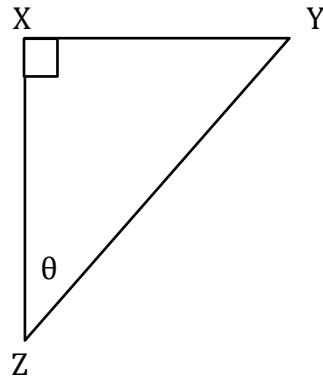
Date: _____

Find the trigonometric ratios.

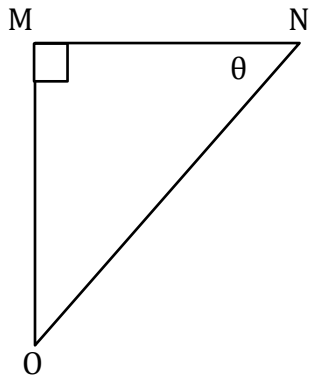
1) $\sin\theta$



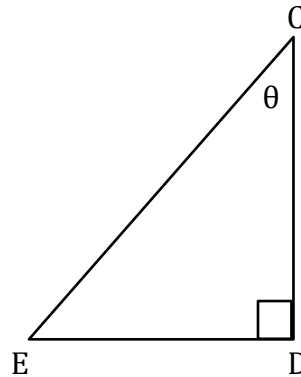
2) $\cos\theta$



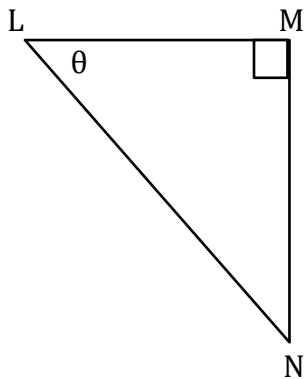
3) $\tan\theta$



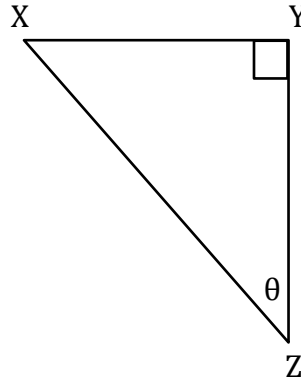
4) $\sin\theta$



5) $\cos\theta$



6) $\tan\theta$



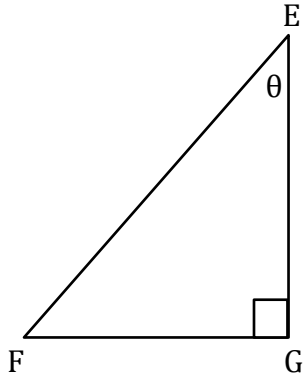
Trigonometry

Name: _____

Date: _____

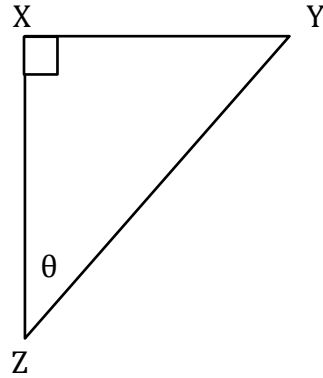
Find the trigonometric ratios.

1) $\sin\theta$



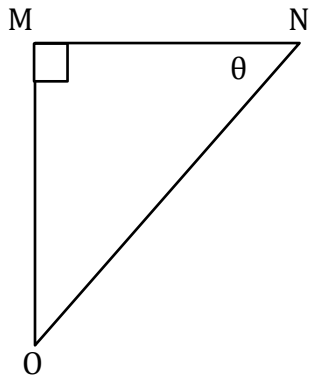
$$\frac{FG}{EF}$$

2) $\cos\theta$



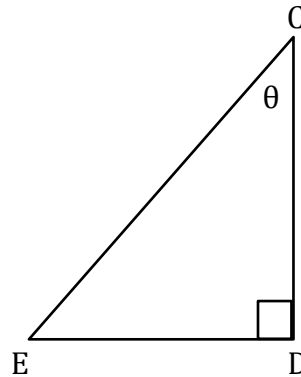
$$\frac{XZ}{YZ}$$

3) $\tan\theta$



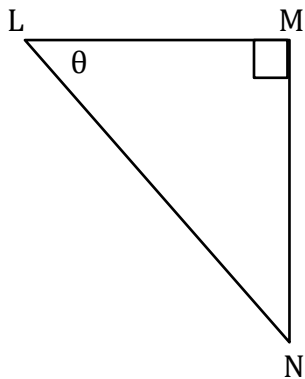
$$\frac{MO}{MN}$$

4) $\sin\theta$



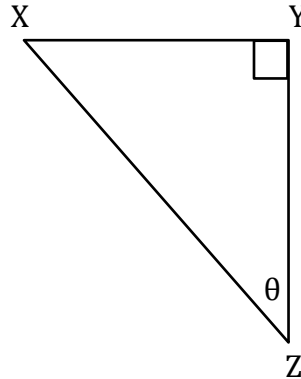
$$\frac{ED}{CE}$$

5) $\cos\theta$



$$\frac{LM}{LN}$$

6) $\tan\theta$



$$\frac{XY}{YZ}$$