

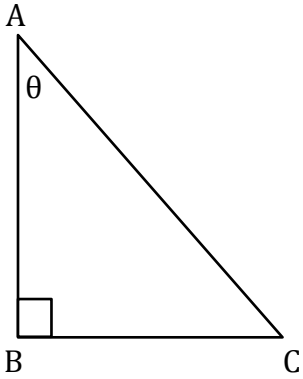
# Trigonometry

Name: \_\_\_\_\_

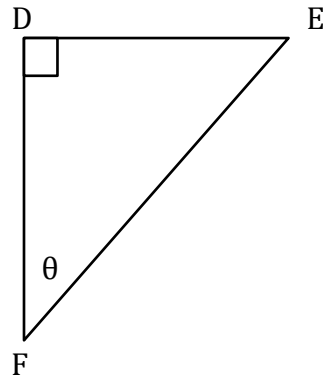
Date: \_\_\_\_\_

Find the trigonometric ratios.

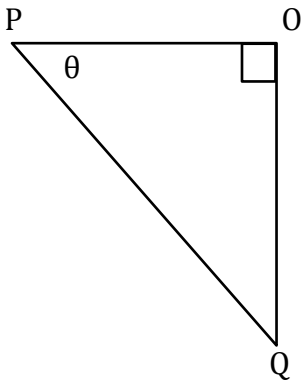
1) cosec $\theta$



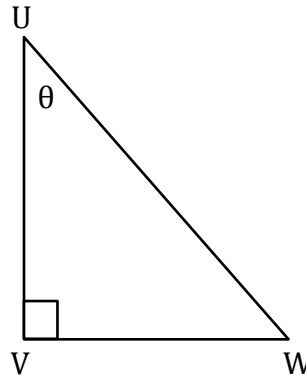
2) sec $\theta$



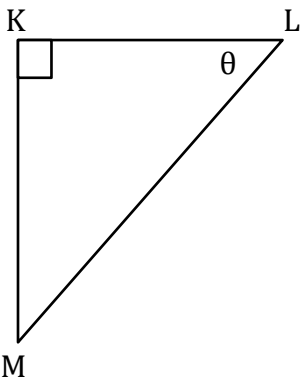
3) cot $\theta$



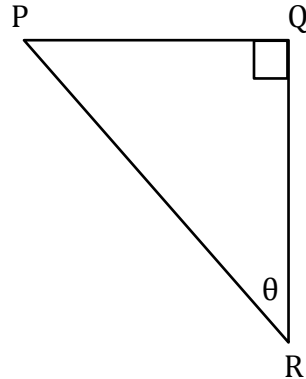
4) cosec $\theta$



5) cot $\theta$



6) sec $\theta$



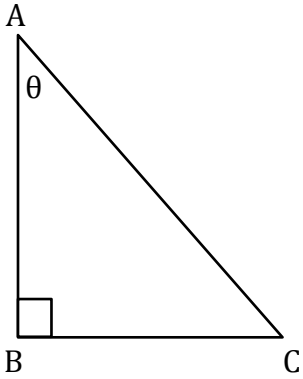
# Trigonometry

Name: \_\_\_\_\_

Date: \_\_\_\_\_

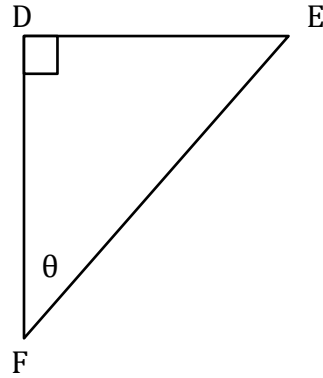
Find the trigonometric ratios.

1) cosec $\theta$



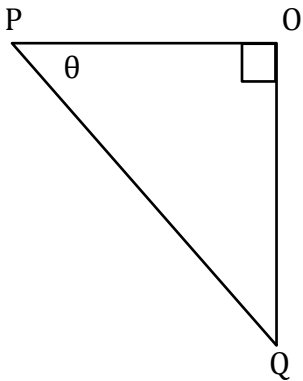
$$\frac{AC}{BC}$$

2) sec $\theta$



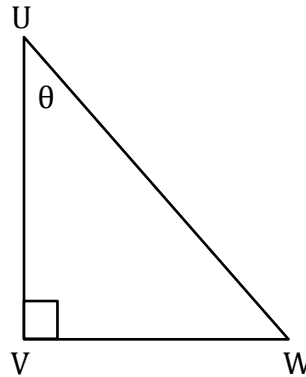
$$\frac{EF}{DF}$$

3) cot $\theta$



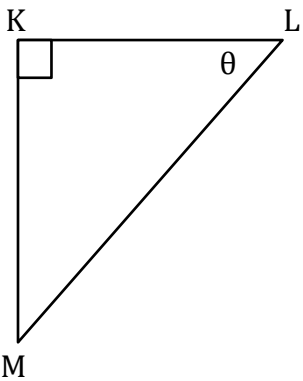
$$\frac{PO}{OQ}$$

4) cosec $\theta$



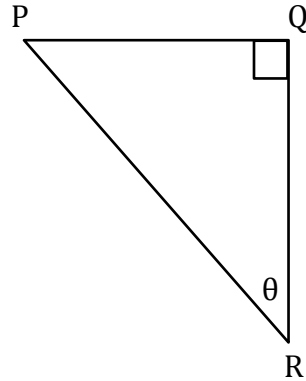
$$\frac{UW}{VW}$$

5) cot $\theta$



$$\frac{KL}{KM}$$

6) sec $\theta$



$$\frac{PR}{QR}$$