

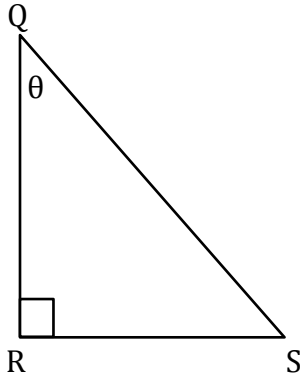
Trigonometry

Name: _____

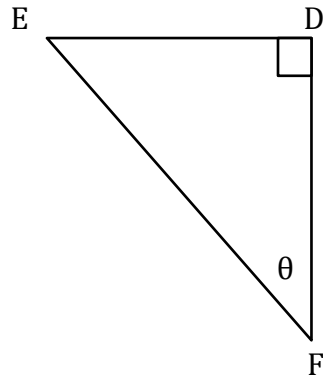
Date: _____

Find the trigonometric ratios.

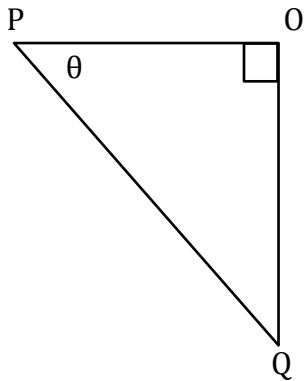
1) $\sec\theta$



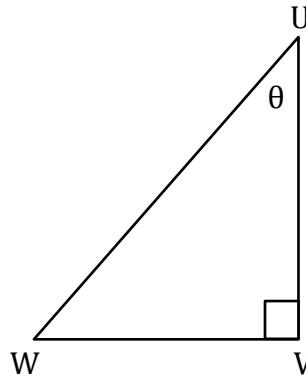
2) $\operatorname{cosec}\theta$



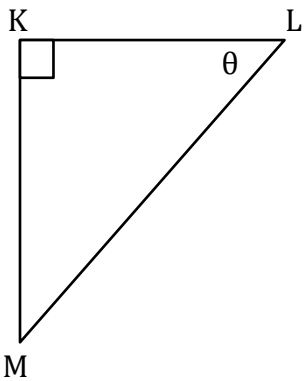
3) $\sec\theta$



4) $\cot\theta$



5) $\cot\theta$



6) $\operatorname{cosec}\theta$

