

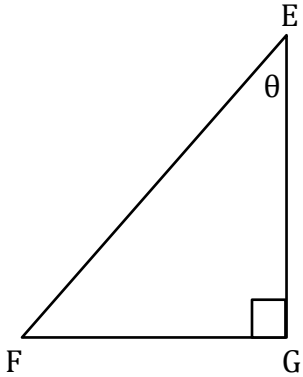
Trigonometry

Name: _____

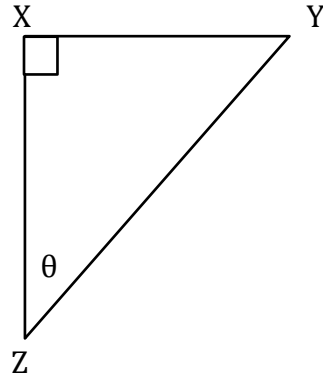
Date: _____

Find the trigonometric ratios.

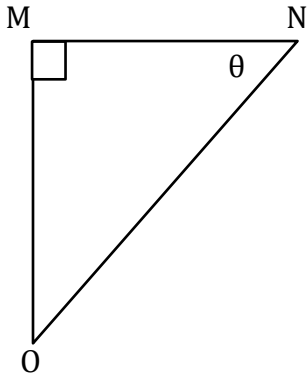
1) $\cot\theta$



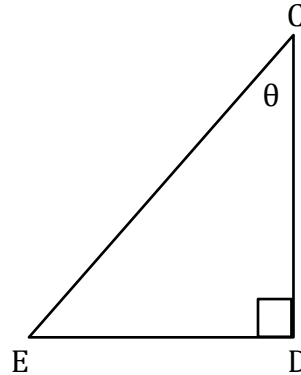
2) $\sec\theta$



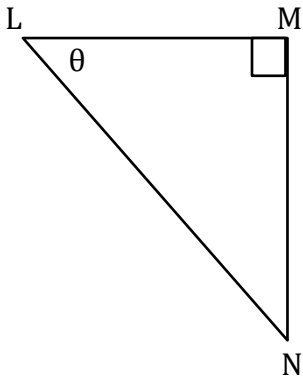
3) $\operatorname{cosec}\theta$



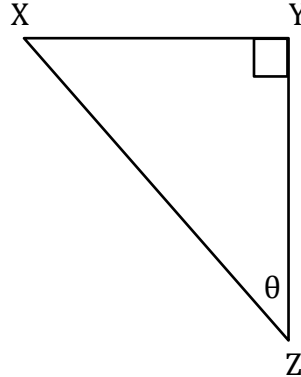
4) $\sec\theta$



5) $\operatorname{cosec}\theta$



6) $\cot\theta$



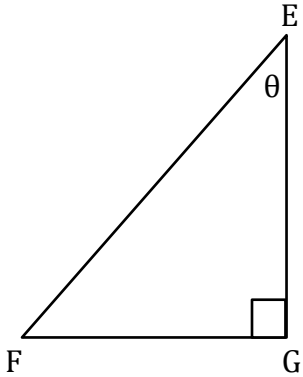
Trigonometry

Name: _____

Date: _____

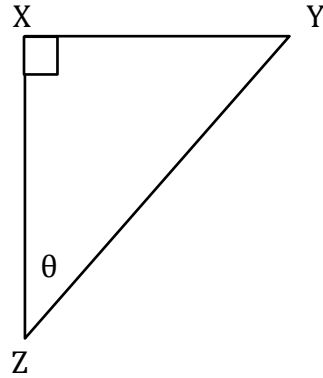
Find the trigonometric ratios.

1) $\cot\theta$



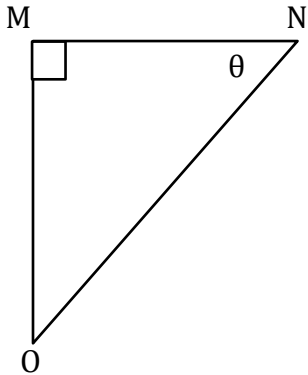
$$\frac{EG}{FG}$$

2) $\sec\theta$



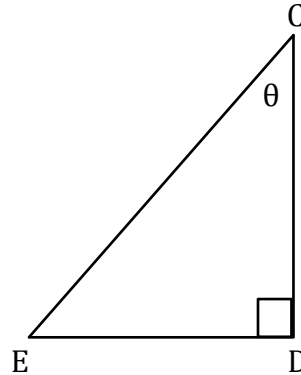
$$\frac{YZ}{XZ}$$

3) $\operatorname{cosec}\theta$



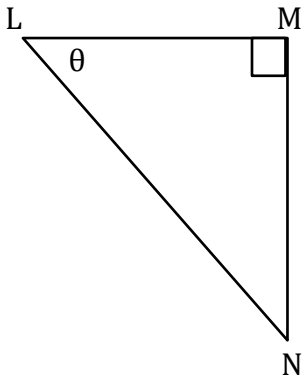
$$\frac{NO}{MO}$$

4) $\sec\theta$



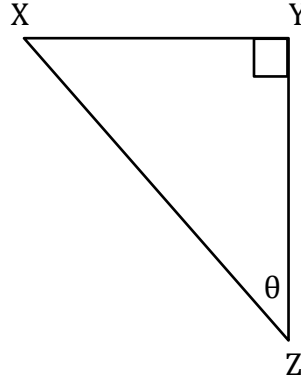
$$\frac{CE}{ED}$$

5) $\operatorname{cosec}\theta$



$$\frac{LN}{MN}$$

6) $\cot\theta$



$$\frac{YZ}{XY}$$