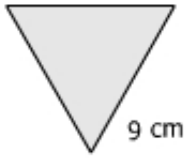


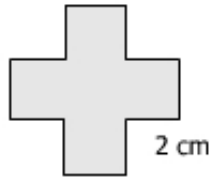
Name: _____

Date: _____

Find perimeter for each figure.



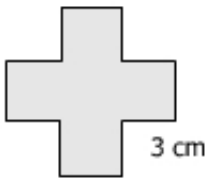
P= _____




P= _____



P= _____



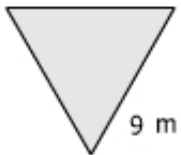
P= _____



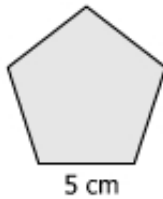
P= _____



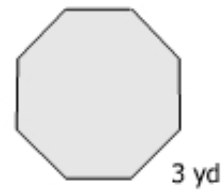
P= _____



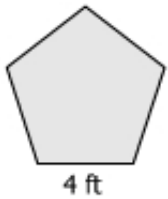
P= _____



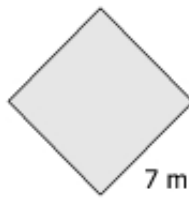
P= _____



P= _____



P= _____



P= _____



P= _____

Name: _____



Date: _____

Answers:

27	24	54
36	24	24
27	25	24
20	28	72