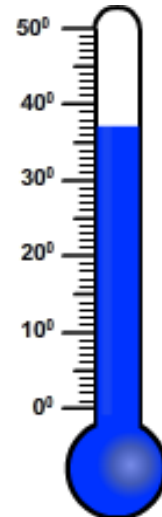
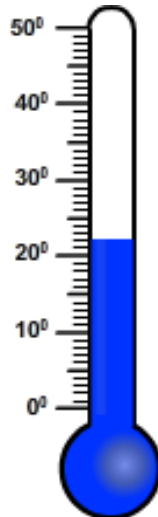
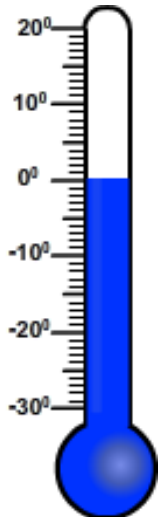
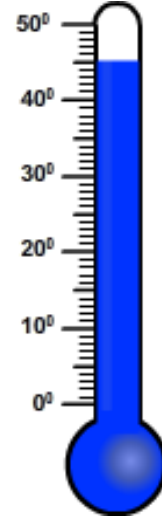
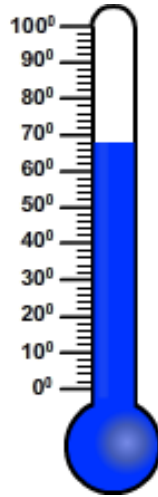
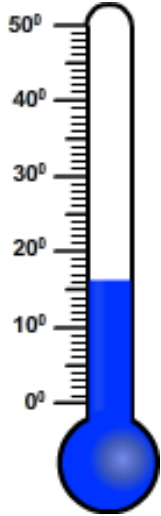


Temperature

Name: _____

Date: _____

Solve each problem cut and paste the appropriate answers.



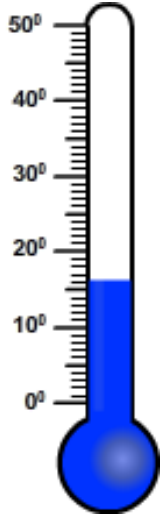
Normal Human Body Temperature	Temperature of the desert in hot day	68 °C 155 °F	Hot Milk Temperature
16°C 60 °F	45°C 113 °F	Water freezes at	37° C 98.6° F
Temperature in comfortable room	22 °C 72 °F	Dew point temperature	0 °C 32 °F

Temperature

Name: _____

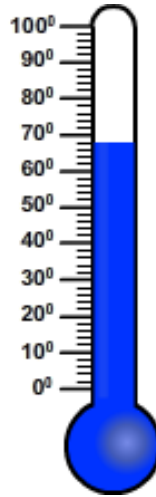
Date: _____

Solve each problem cut and paste the appropriate answers.



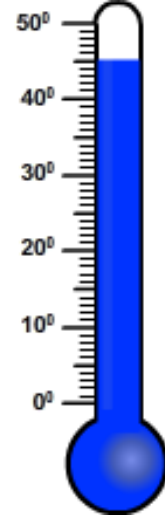
Dew point
temperature

16°C
60°F



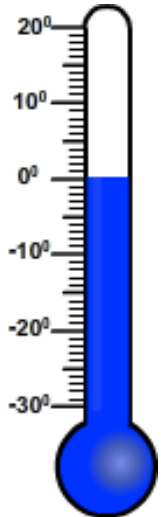
Hot Milk
Temperature

68°C
155°F



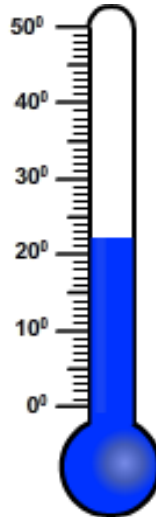
Temperature of the
desert in hot day

45°C
113°F



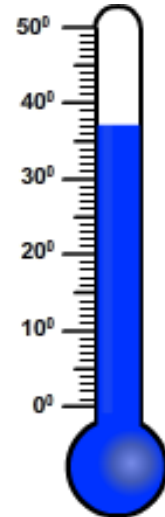
Water freezes at

0°C
32°F



Temperature in
comfortable room

22°C
72°F



Normal Human Body
Temperature

37°C
98.6°F