

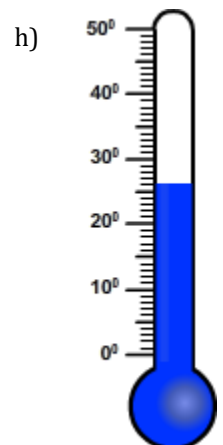
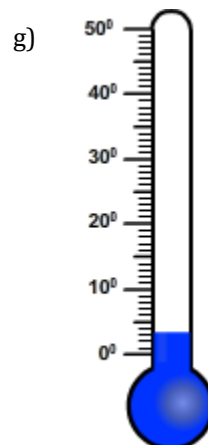
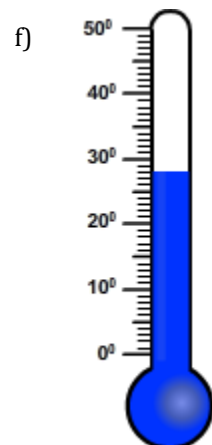
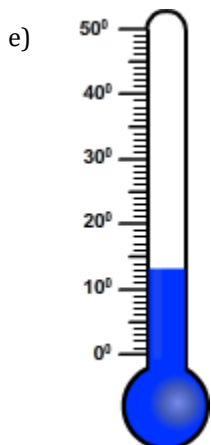
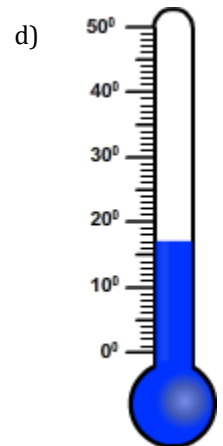
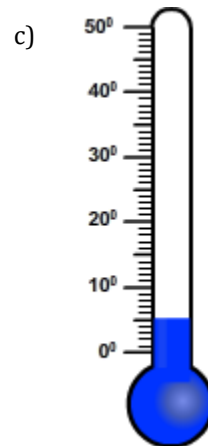
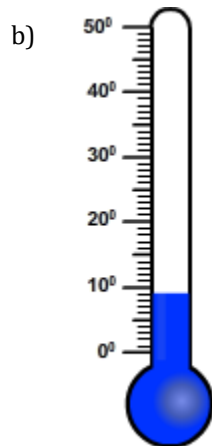
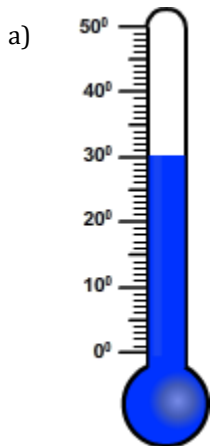
Temperature

Name: _____

Date: _____

Choose the appropriate thermometer for each problem.

- 1) Which thermometer represents the temperature 3°?
- 2) Which thermometer represents the temperature 13°?
- 3) Which thermometer represents the temperature 26°?
- 4) Which thermometer represents the temperature 17°?
- 5) Which thermometer represents the temperature 30°?
- 6) Which thermometer represents the temperature 5°?
- 7) Which thermometer represents the temperature 9°?
- 8) Which thermometer represents the temperature 28°?



Temperature

Name: _____

Date: _____

Choose the appropriate thermometer for each problem.

- 1) Which thermometer represents the temperature 3°?
- 2) Which thermometer represents the temperature 13°?
- 3) Which thermometer represents the temperature 26°?
- 4) Which thermometer represents the temperature 17°?
- 5) Which thermometer represents the temperature 30°?
- 6) Which thermometer represents the temperature 5°?
- 7) Which thermometer represents the temperature 9°?
- 8) Which thermometer represents the temperature 28°?

g

e

h

d

a

c

b

f

