

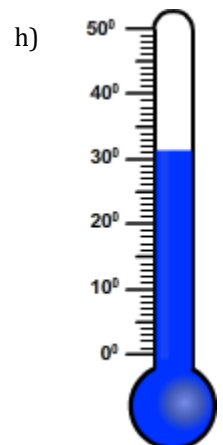
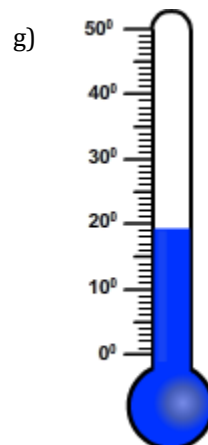
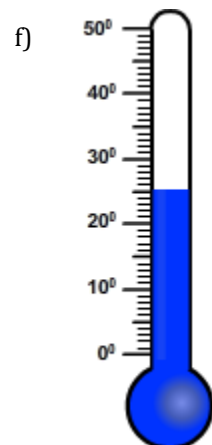
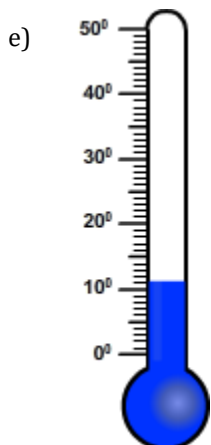
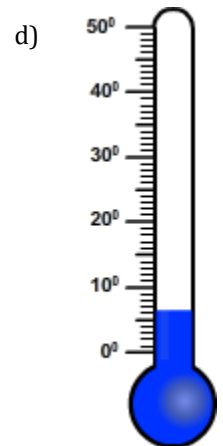
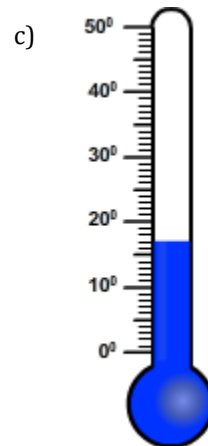
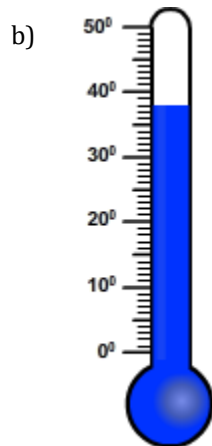
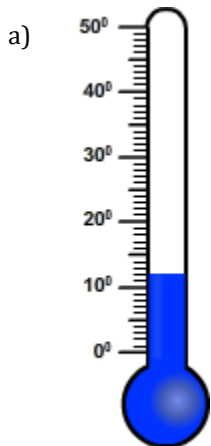
# Temperature

Name: \_\_\_\_\_

Date: \_\_\_\_\_

Choose the appropriate thermometer for each problem.

- 1) Which thermometer represents the temperature  $6^{\circ}$ ?
- 2) Which thermometer represents the temperature  $11^{\circ}$ ?
- 3) Which thermometer represents the temperature  $17^{\circ}$ ?
- 4) Which thermometer represents the temperature  $38^{\circ}$ ?
- 5) Which thermometer represents the temperature  $19^{\circ}$ ?
- 6) Which thermometer represents the temperature  $25^{\circ}$ ?
- 7) Which thermometer represents the temperature  $31^{\circ}$ ?
- 8) Which thermometer represents the temperature  $12^{\circ}$ ?

# Temperature

Name: \_\_\_\_\_

Date: \_\_\_\_\_

Choose the appropriate thermometer for each problem.

- 1) Which thermometer represents the temperature 6°?
- 2) Which thermometer represents the temperature 11°?
- 3) Which thermometer represents the temperature 17°?
- 4) Which thermometer represents the temperature 38°?
- 5) Which thermometer represents the temperature 19°?
- 6) Which thermometer represents the temperature 25°?
- 7) Which thermometer represents the temperature 31°?
- 8) Which thermometer represents the temperature 12°?

d

e

c

b

g

f

h

a

