

Temperature

Name: _____

Date: _____

Choose the appropriate thermometer for each problem.

1) Which thermometer represents the temperature 46° ?

2) Which thermometer represents the temperature 23° ?

3) Which thermometer represents the temperature 39° ?

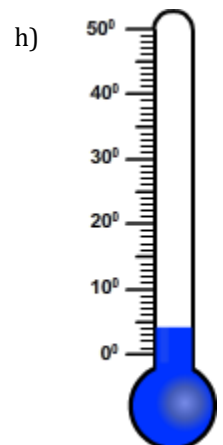
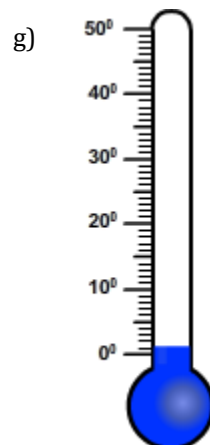
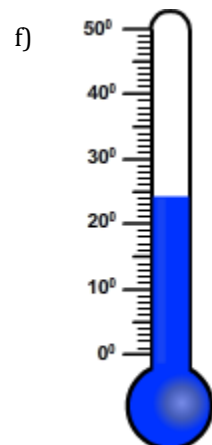
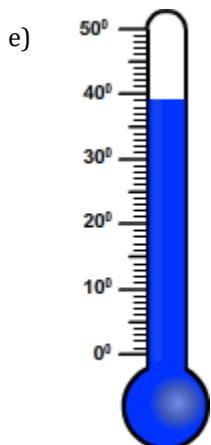
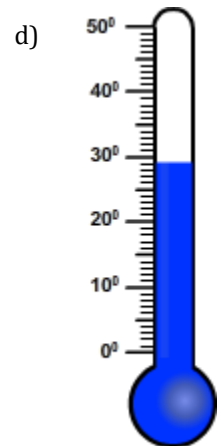
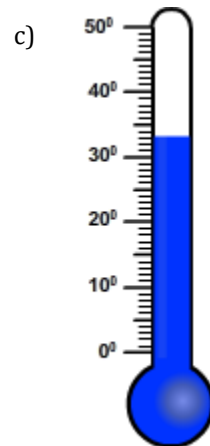
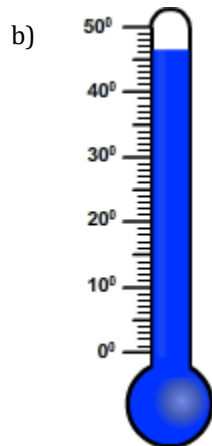
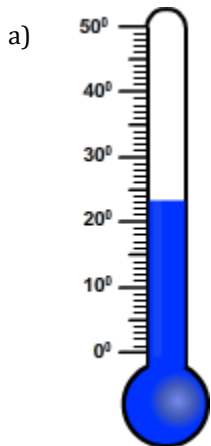
4) Which thermometer represents the temperature 4° ?

5) Which thermometer represents the temperature 29° ?

6) Which thermometer represents the temperature 1° ?

7) Which thermometer represents the temperature 24° ?

8) Which thermometer represents the temperature 33° ?



Temperature

Name: _____

Date: _____

Choose the appropriate thermometer for each problem.

1) Which thermometer represents the temperature 46° ?

b

2) Which thermometer represents the temperature 23° ?

a

3) Which thermometer represents the temperature 39° ?

e

4) Which thermometer represents the temperature 4° ?

h

5) Which thermometer represents the temperature 29° ?

d

6) Which thermometer represents the temperature 1° ?

g

7) Which thermometer represents the temperature 24° ?

f

8) Which thermometer represents the temperature 33° ?

c

