

# Temperature

Name: \_\_\_\_\_

Date: \_\_\_\_\_

Choose the appropriate thermometer for each problem.

1) Which thermometer represents the temperature 15°?

2) Which thermometer represents the temperature 47°?

3) Which thermometer represents the temperature 35°?

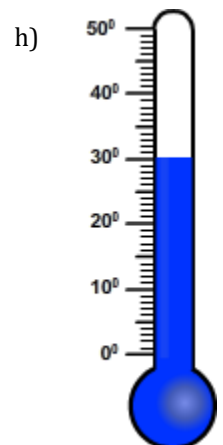
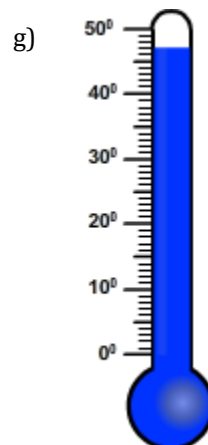
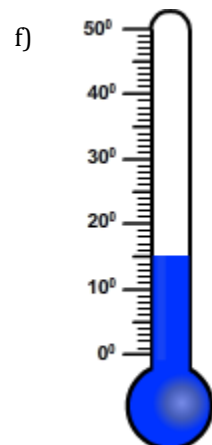
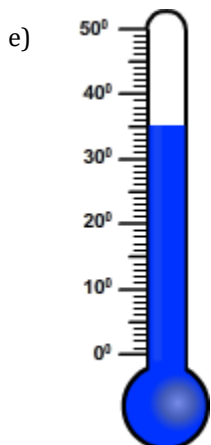
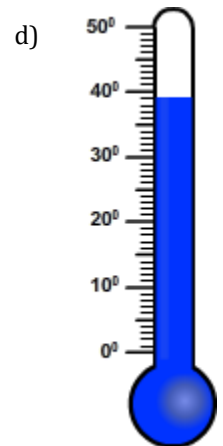
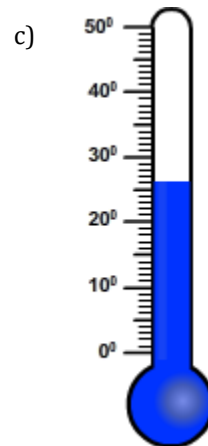
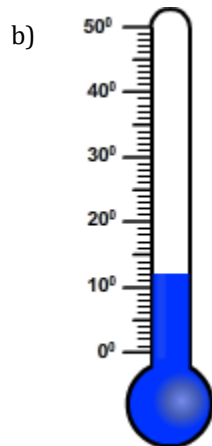
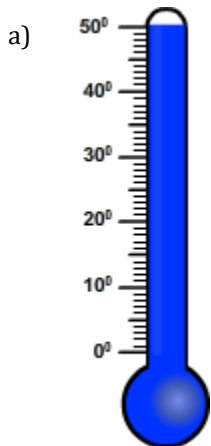
4) Which thermometer represents the temperature 26°?

5) Which thermometer represents the temperature 30°?

6) Which thermometer represents the temperature 39°?

7) Which thermometer represents the temperature 50°?

8) Which thermometer represents the temperature 12°?



# Temperature

Name: \_\_\_\_\_

Date: \_\_\_\_\_

Choose the appropriate thermometer for each problem.

1) Which thermometer represents the temperature 15°?

f

2) Which thermometer represents the temperature 47°?

g

3) Which thermometer represents the temperature 35°?

e

4) Which thermometer represents the temperature 26°?

c

5) Which thermometer represents the temperature 30°?

h

6) Which thermometer represents the temperature 39°?

d

7) Which thermometer represents the temperature 50°?

a

8) Which thermometer represents the temperature 12°?

b

