

Temperature

Name: _____

Date: _____

Choose the appropriate thermometer for each problem.

1) Which thermometer represents the temperature 30°?

2) Which thermometer represents the temperature 23°?

3) Which thermometer represents the temperature 20°?

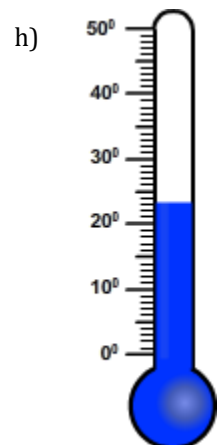
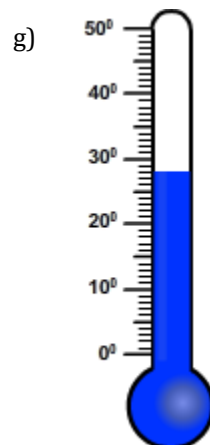
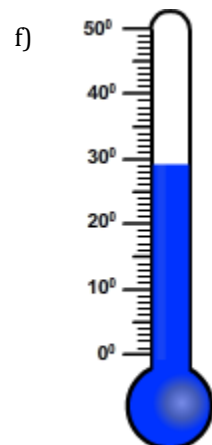
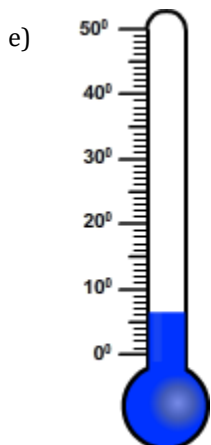
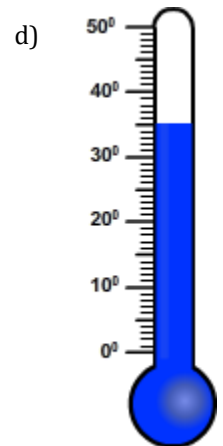
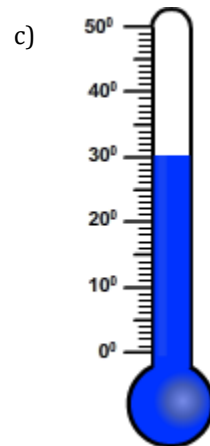
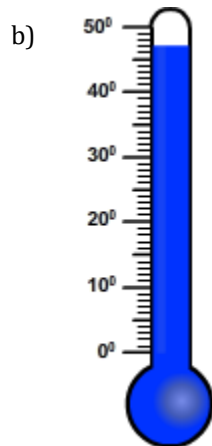
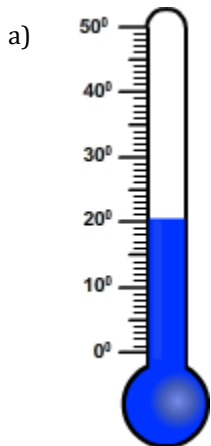
4) Which thermometer represents the temperature 6°?

5) Which thermometer represents the temperature 28°?

6) Which thermometer represents the temperature 47°?

7) Which thermometer represents the temperature 35°?

8) Which thermometer represents the temperature 29°?



Temperature

Name: _____

Date: _____

Choose the appropriate thermometer for each problem.

1) Which thermometer represents the temperature 30°?

c

2) Which thermometer represents the temperature 23°?

h

3) Which thermometer represents the temperature 20°?

a

4) Which thermometer represents the temperature 6°?

e

5) Which thermometer represents the temperature 28°?

g

6) Which thermometer represents the temperature 47°?

b

7) Which thermometer represents the temperature 35°?

d

8) Which thermometer represents the temperature 29°?

f

