

Temperature

Name: _____

Date: _____

Choose the appropriate thermometer for each problem.

1) Which thermometer represents the temperature 18°?

2) Which thermometer represents the temperature 50°?

3) Which thermometer represents the temperature 26°?

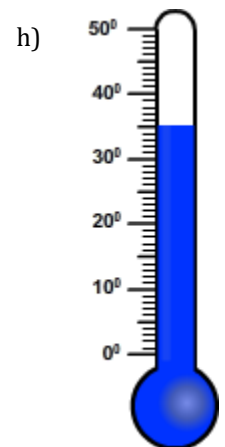
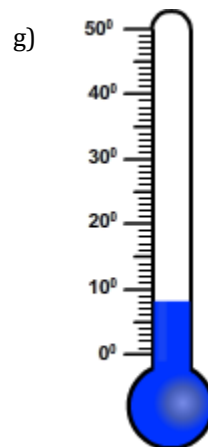
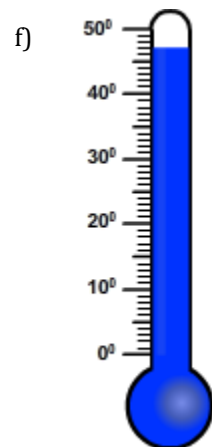
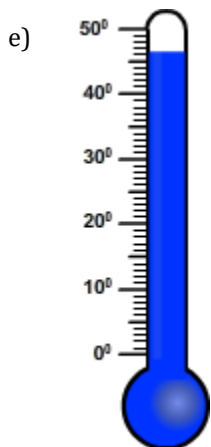
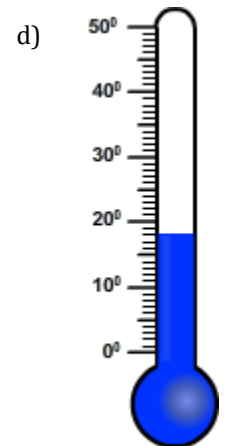
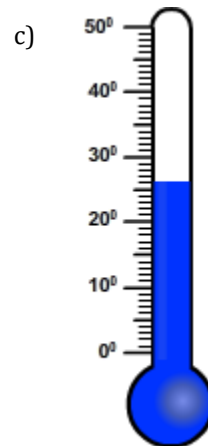
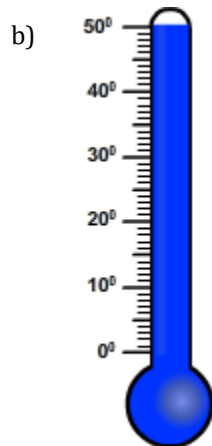
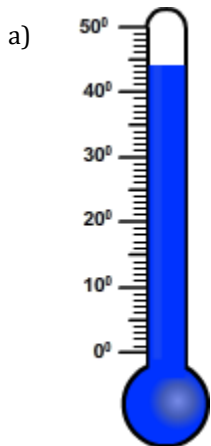
4) Which thermometer represents the temperature 46°?

5) Which thermometer represents the temperature 44°?

6) Which thermometer represents the temperature 35°?

7) Which thermometer represents the temperature 47°?

8) Which thermometer represents the temperature 8°?



Temperature

Name: _____

Date: _____

Choose the appropriate thermometer for each problem.

1) Which thermometer represents the temperature 18°?

d

2) Which thermometer represents the temperature 50°?

b

3) Which thermometer represents the temperature 26°?

c

4) Which thermometer represents the temperature 46°?

e

5) Which thermometer represents the temperature 44°?

a

6) Which thermometer represents the temperature 35°?

h

7) Which thermometer represents the temperature 47°?

f

8) Which thermometer represents the temperature 8°?

g

