

# Temperature

Name: \_\_\_\_\_

Date: \_\_\_\_\_

Choose the appropriate thermometer for each problem.

1) Which thermometer represents the temperature 25°?

2) Which thermometer represents the temperature 9°?

3) Which thermometer represents the temperature 13°?

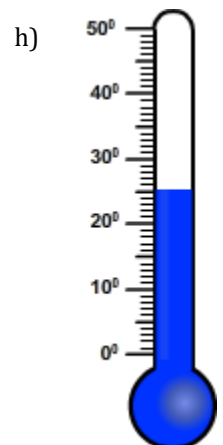
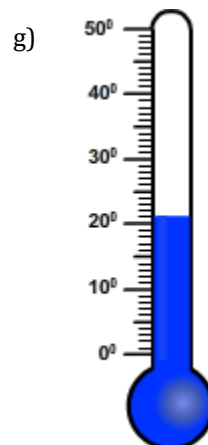
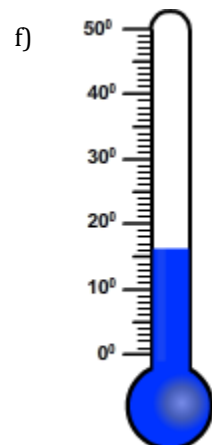
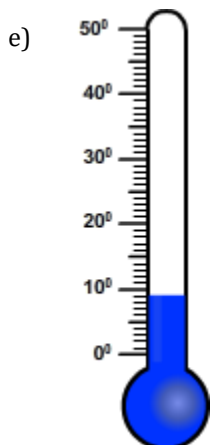
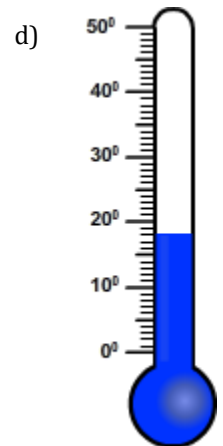
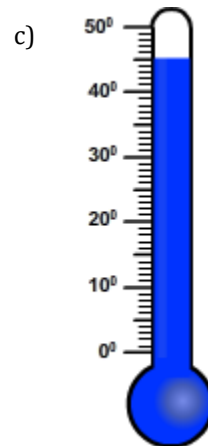
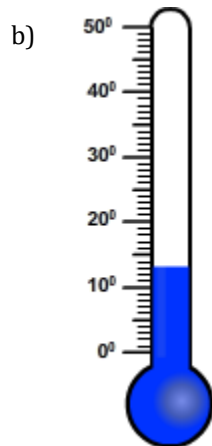
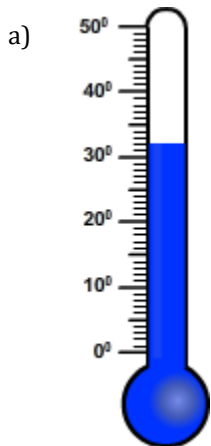
4) Which thermometer represents the temperature 32°?

5) Which thermometer represents the temperature 45°?

6) Which thermometer represents the temperature 21°?

7) Which thermometer represents the temperature 18°?

8) Which thermometer represents the temperature 16°?



# Temperature

Name: \_\_\_\_\_

Date: \_\_\_\_\_

Choose the appropriate thermometer for each problem.

1) Which thermometer represents the temperature 25°?

h

2) Which thermometer represents the temperature 9°?

e

3) Which thermometer represents the temperature 13°?

b

4) Which thermometer represents the temperature 32°?

a

5) Which thermometer represents the temperature 45°?

c

6) Which thermometer represents the temperature 21°?

g

7) Which thermometer represents the temperature 18°?

d

8) Which thermometer represents the temperature 16°?

f

