

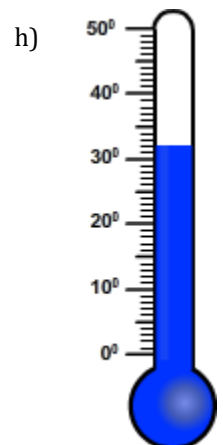
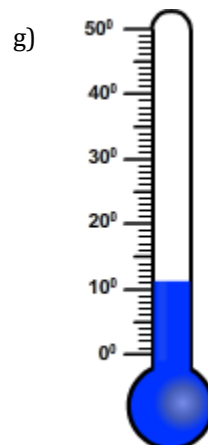
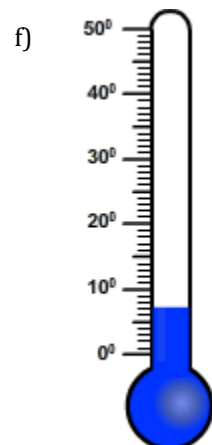
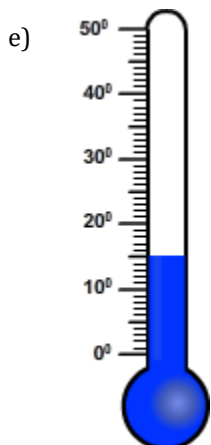
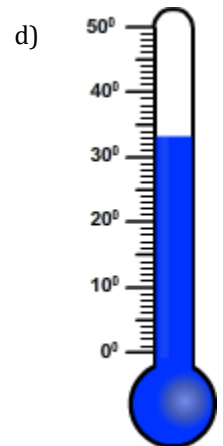
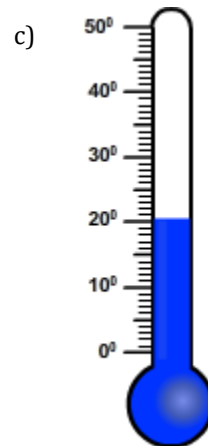
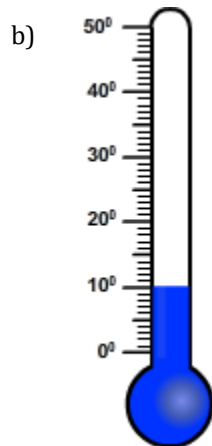
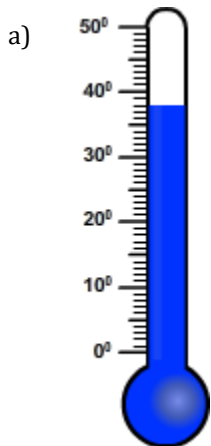
Temperature

Name: _____

Date: _____

Choose the appropriate thermometer for each problem.

- 1) Which thermometer represents the temperature 7°?
- 2) Which thermometer represents the temperature 15°?
- 3) Which thermometer represents the temperature 10°?
- 4) Which thermometer represents the temperature 33°?
- 5) Which thermometer represents the temperature 20°?
- 6) Which thermometer represents the temperature 32°?
- 7) Which thermometer represents the temperature 38°?
- 8) Which thermometer represents the temperature 11°?



Temperature

Name: _____

Date: _____

Choose the appropriate thermometer for each problem.

1) Which thermometer represents the temperature 7°?

f

2) Which thermometer represents the temperature 15°?

e

3) Which thermometer represents the temperature 10°?

b

4) Which thermometer represents the temperature 33°?

d

5) Which thermometer represents the temperature 20°?

c

6) Which thermometer represents the temperature 32°?

h

7) Which thermometer represents the temperature 38°?

a

8) Which thermometer represents the temperature 11°?

g

